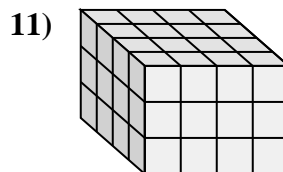
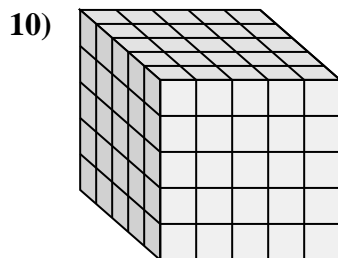
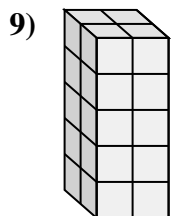
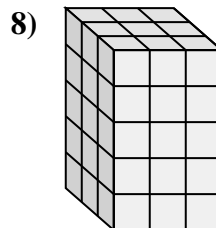
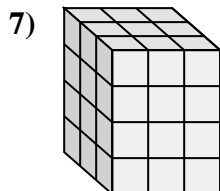
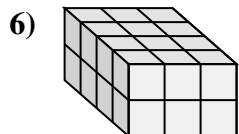
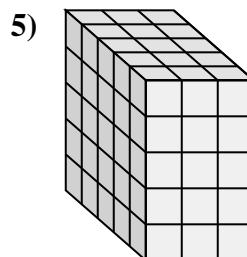
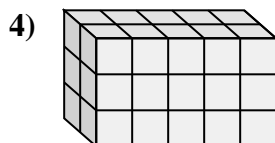
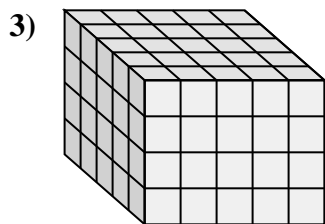
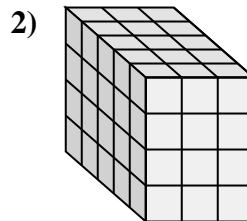
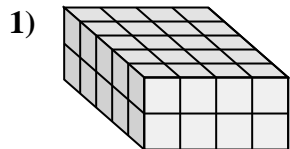
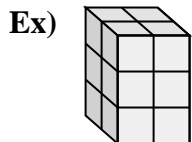




Match each problem with the equation that could represent it. Answer with the missing term and letter.



Answers

Ex. C, 3

1. _____

2. _____

3. _____

4. _____

5. _____

6. _____

7. _____

8. _____

9. _____

10. _____

11. _____

A. $__ \times 2 \times 5 = 20$

B. $5 \times __ \times 5 = 125$

C. $2 \times 2 \times __ = 12$

D. $3 \times 3 \times __ = 45$

E. $3 \times __ \times 4 = 36$

F. $5 \times 4 \times __ = 40$

G. $4 \times __ \times 2 = 24$

H. $__ \times 5 \times 4 = 100$

I. $2 \times __ \times 3 = 30$

J. $__ \times 4 \times 3 = 48$

K. $__ \times 3 \times 4 = 60$

L. $5 \times 3 \times 5 = __$

