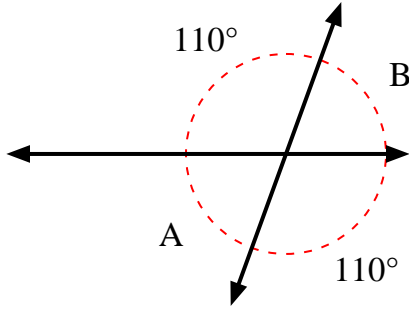


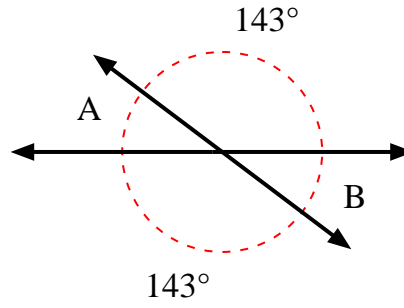


Find the value of angle 'A' and angle 'B'.

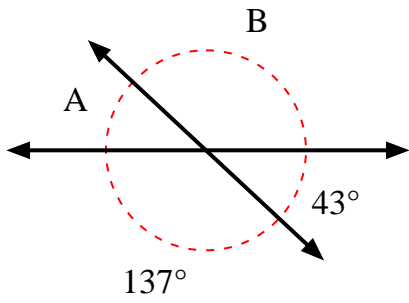
1)



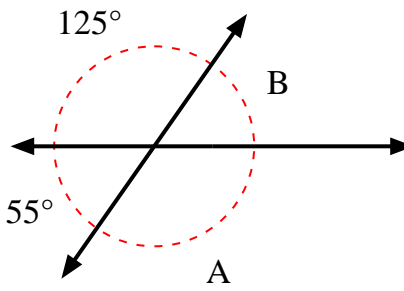
2)



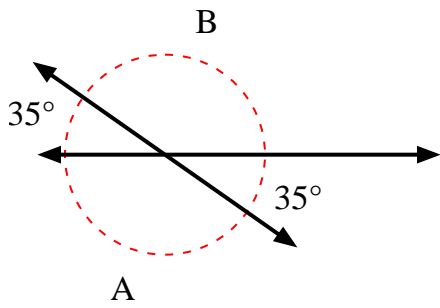
3)



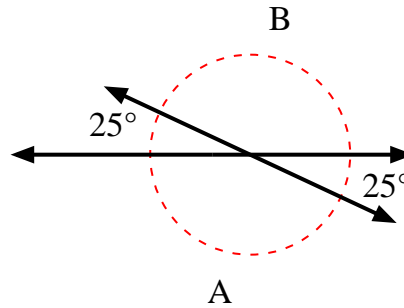
4)



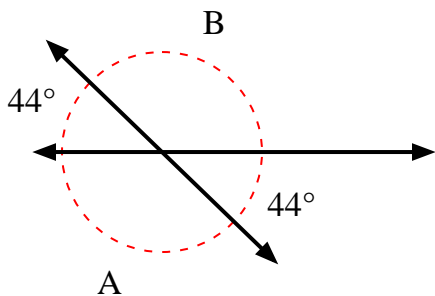
5)



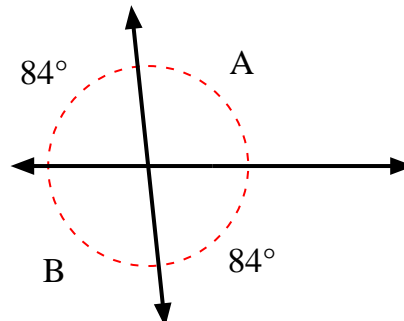
6)



7)



8)



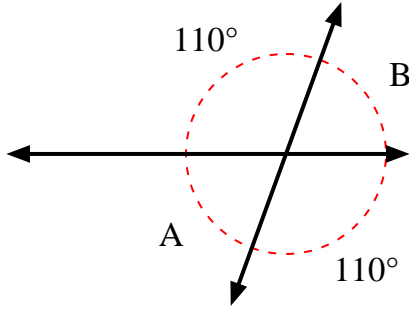
Answers

1. \_\_\_\_\_
2. \_\_\_\_\_
3. \_\_\_\_\_
4. \_\_\_\_\_
5. \_\_\_\_\_
6. \_\_\_\_\_
7. \_\_\_\_\_
8. \_\_\_\_\_

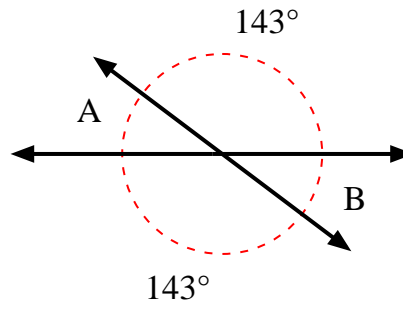


Find the value of angle 'A' and angle 'B'.

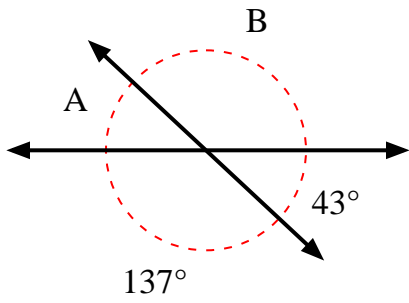
1)



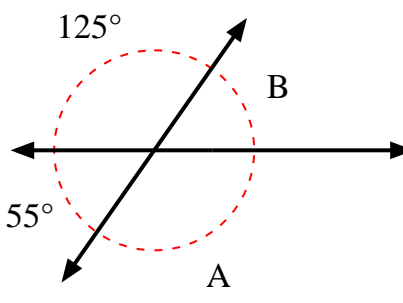
2)



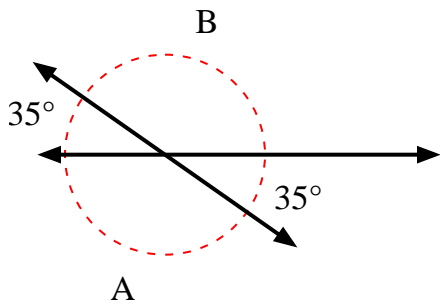
3)



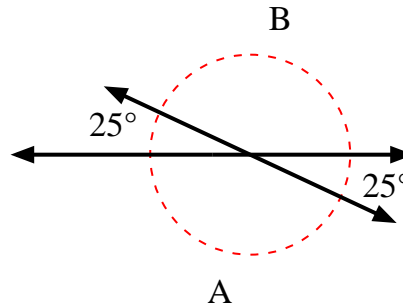
4)



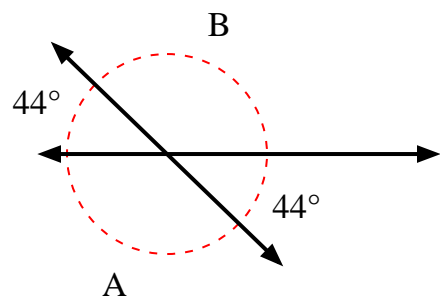
5)



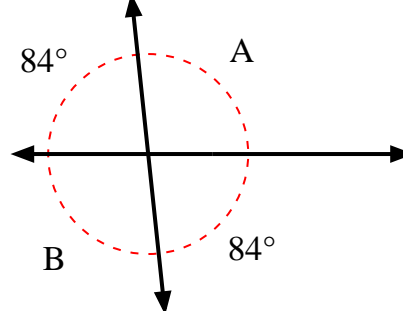
6)



7)



8)



Answers

1.	<b>70°</b>	<b>70°</b>
2.	<b>37°</b>	<b>37°</b>
3.	<b>43°</b>	<b>137°</b>
4.	<b>125°</b>	<b>55°</b>
5.	<b>145°</b>	<b>145°</b>
6.	<b>155°</b>	<b>155°</b>
7.	<b>136°</b>	<b>136°</b>
8.	<b>96°</b>	<b>96°</b>