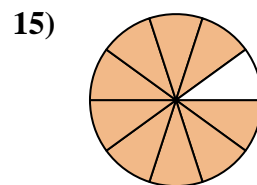
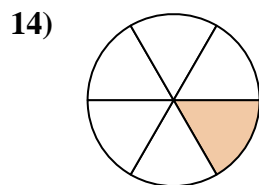
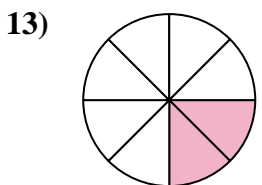
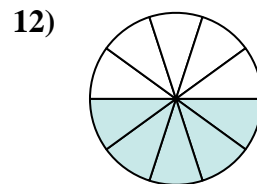
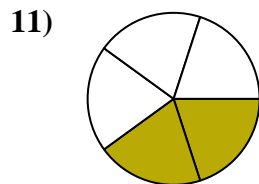
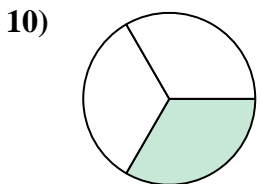
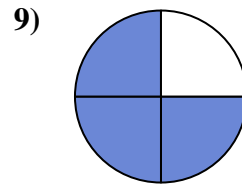
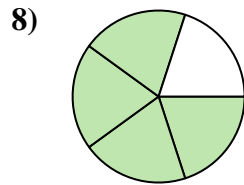
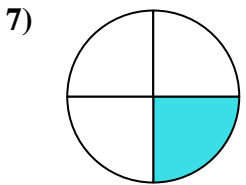
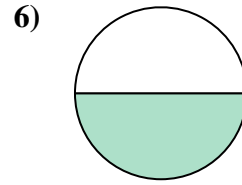
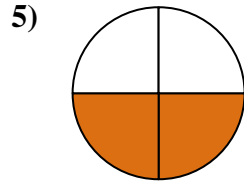
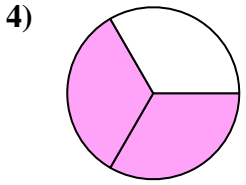
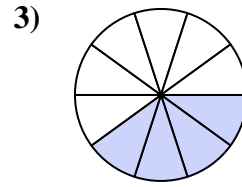
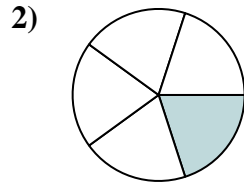
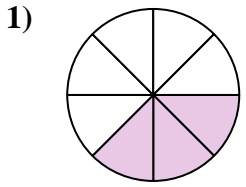




Find the angle (in degrees) of the shaded portion of the circle.

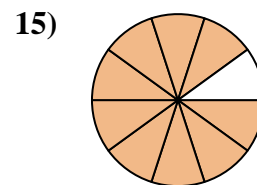
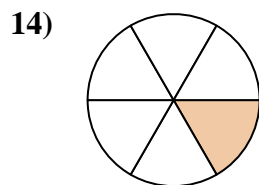
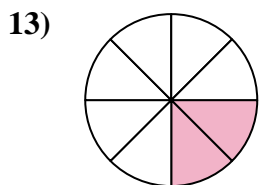
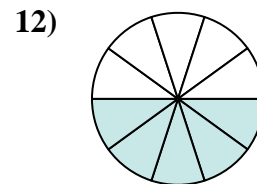
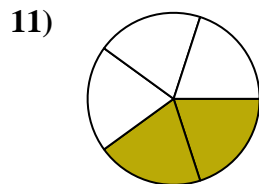
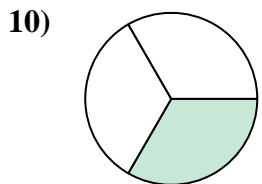
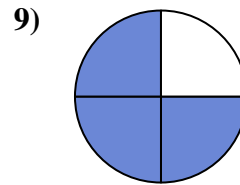
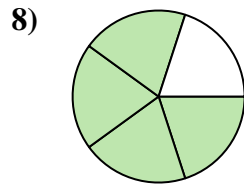
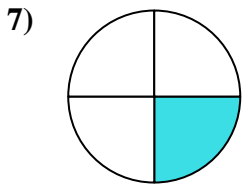
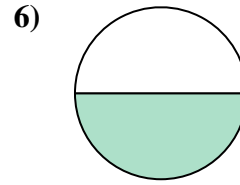
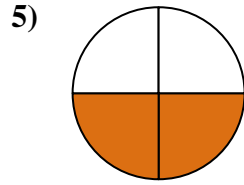
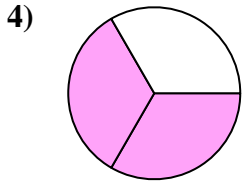
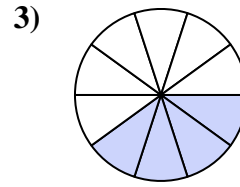
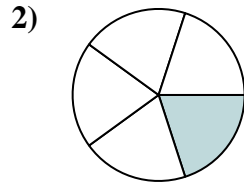
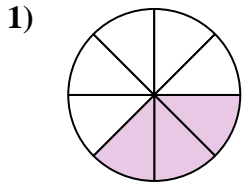
Answers



1. _____
2. _____
3. _____
4. _____
5. _____
6. _____
7. _____
8. _____
9. _____
10. _____
11. _____
12. _____
13. _____
14. _____
15. _____



Find the angle (in degrees) of the shaded portion of the circle.



Answers

1. 135

2. 72

3. 144

4. 240

5. 180

6. 180

7. 90

8. 288

9. 270

10. 120

11. 144

12. 180

13. 90

14. 60

15. 324



Find the angle (in degrees) of the shaded portion of the circle.

Answers

72

240

270

180

180

144

120

180

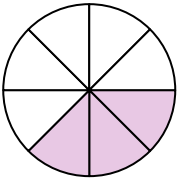
144

135

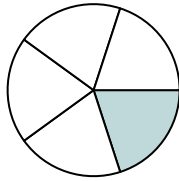
90

288

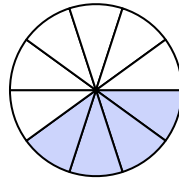
1)



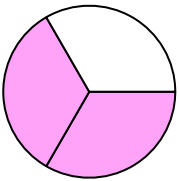
2)



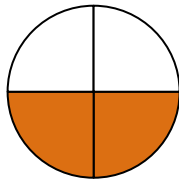
3)



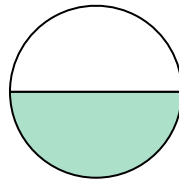
4)



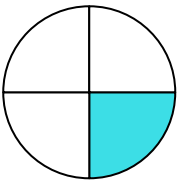
5)



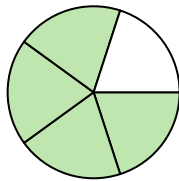
6)



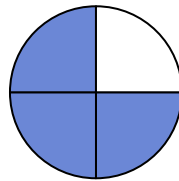
7)



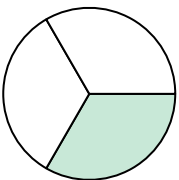
8)



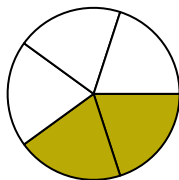
9)



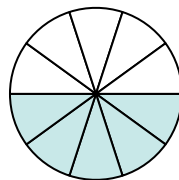
10)



11)



12)



1. _____

2. _____

3. _____

4. _____

5. _____

6. _____

7. _____

8. _____

9. _____

10. _____

11. _____

12. _____