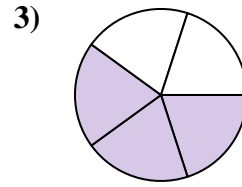
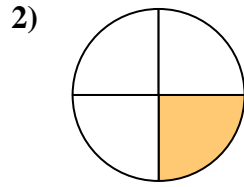
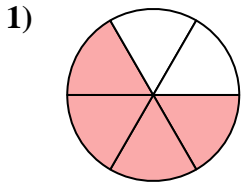




Find the angle (in degrees) of the shaded portion of the circle.

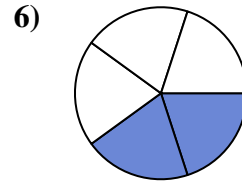
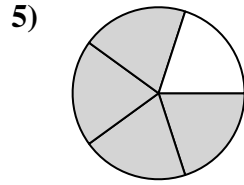
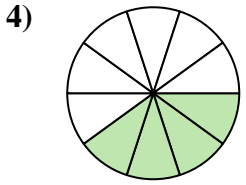
Answers



1. _____

2. _____

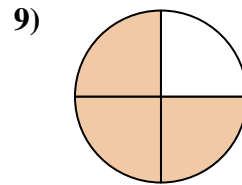
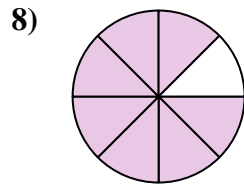
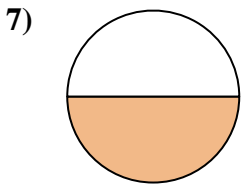
3. _____



4. _____

5. _____

6. _____

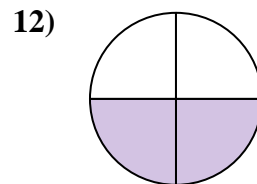
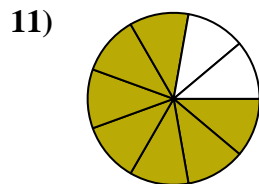
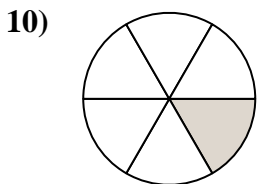


7. _____

8. _____

9. _____

10. _____

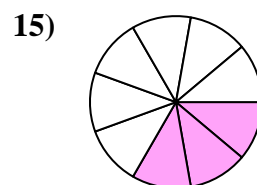
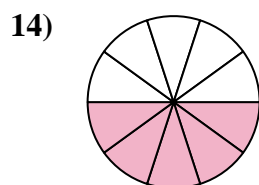
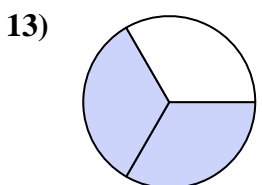


11. _____

12. _____

13. _____

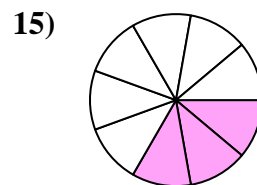
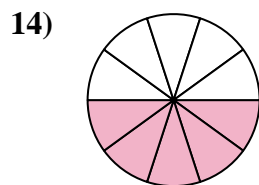
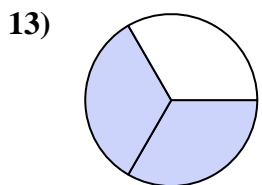
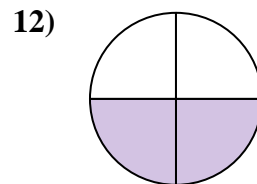
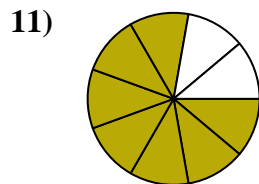
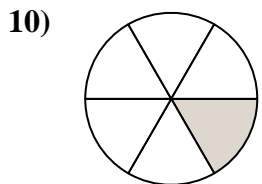
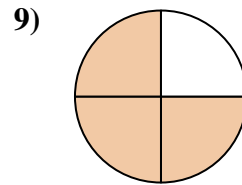
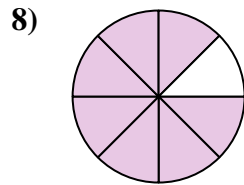
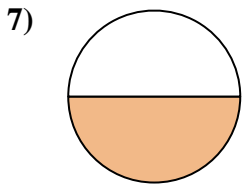
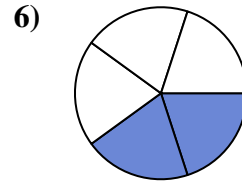
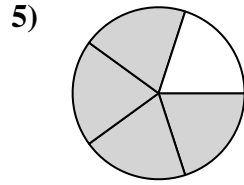
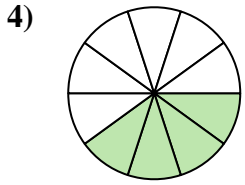
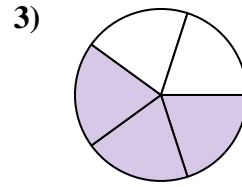
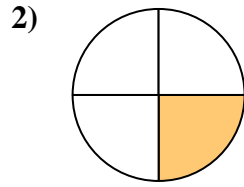
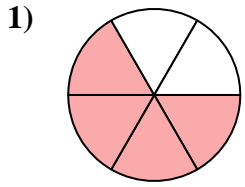
14. _____



15. _____



Find the angle (in degrees) of the shaded portion of the circle.



Answers

1. 240

2. 90

3. 216

4. 144

5. 288

6. 144

7. 180

8. 315

9. 270

10. 60

11. 280

12. 180

13. 240

14. 180

15. 120



Find the angle (in degrees) of the shaded portion of the circle.

Answers

288

216

315

144

280

60

90

240

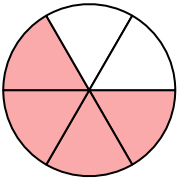
144

270

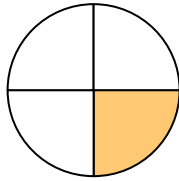
180

180

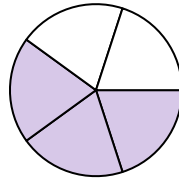
1)



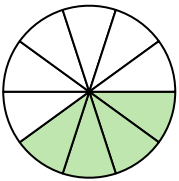
2)



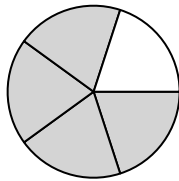
3)



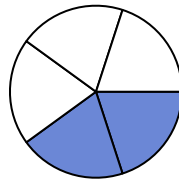
4)



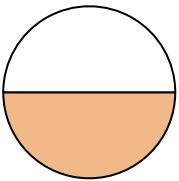
5)



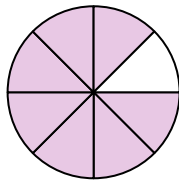
6)



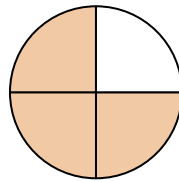
7)



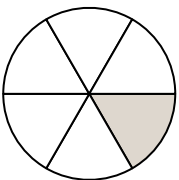
8)



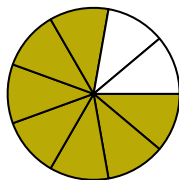
9)



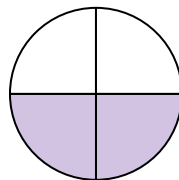
10)



11)



12)



1. _____

2. _____

3. _____

4. _____

5. _____

6. _____

7. _____

8. _____

9. _____

10. _____

11. _____

12. _____