



Calculate the angle of the circle relative to (0,0).

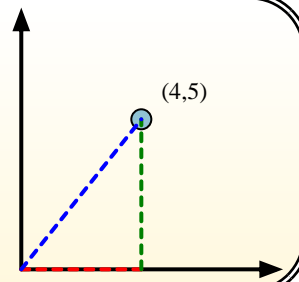
First find the slope.

$$(y_2 - y_1) \div (x_2 - x_1) = m$$

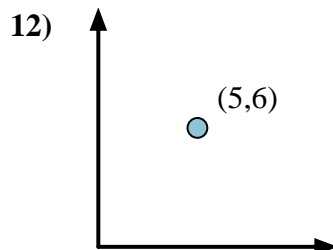
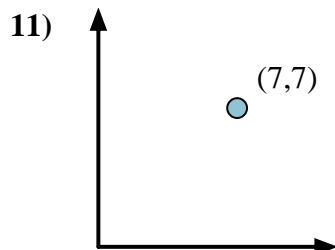
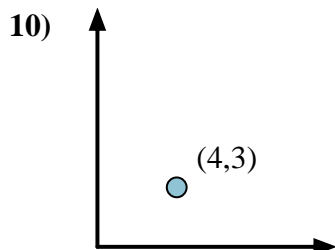
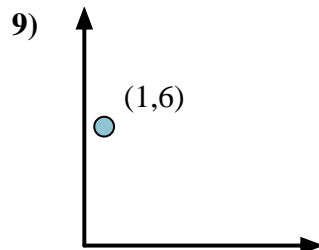
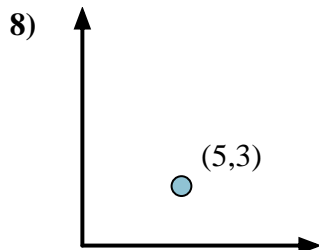
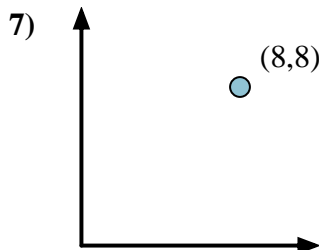
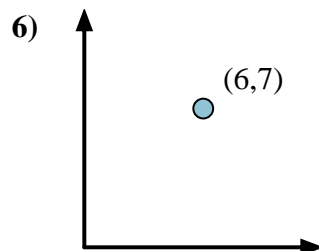
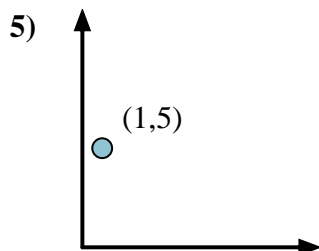
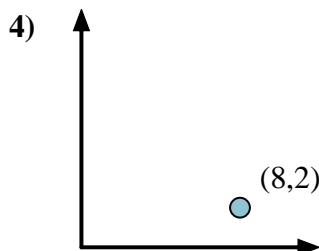
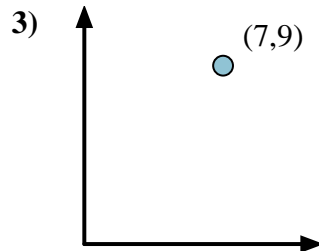
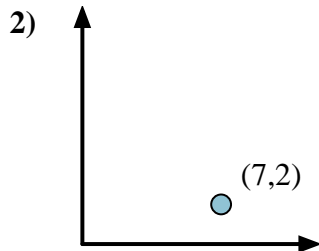
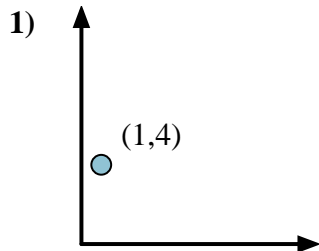
$$(5 - 0) \div (4 - 0) = 1.25$$

Then find the arc tangent (aka. inverse tangent) of the slope.

$$\arctan(1.25) = 51.34^\circ$$



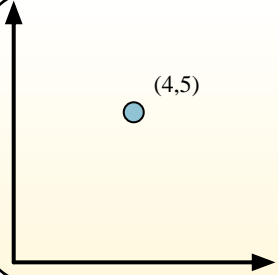
## Answers



1. \_\_\_\_\_
2. \_\_\_\_\_
3. \_\_\_\_\_
4. \_\_\_\_\_
5. \_\_\_\_\_
6. \_\_\_\_\_
7. \_\_\_\_\_
8. \_\_\_\_\_
9. \_\_\_\_\_
10. \_\_\_\_\_
11. \_\_\_\_\_
12. \_\_\_\_\_

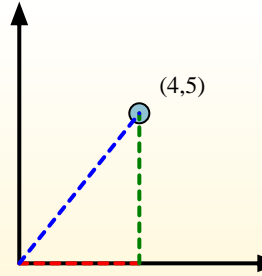


Calculate the angle of the circle relative to (0,0).

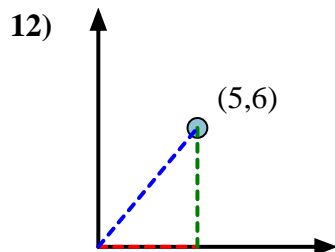
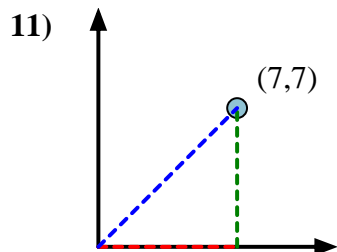
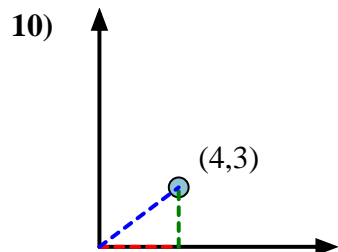
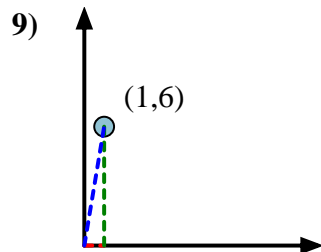
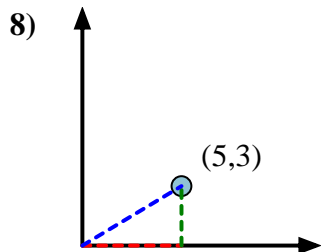
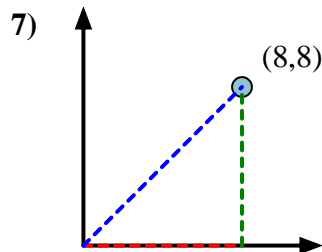
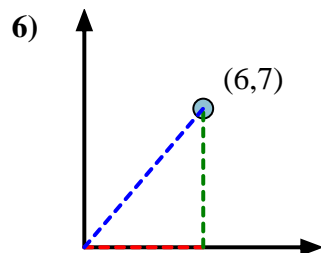
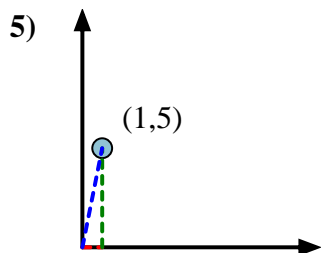
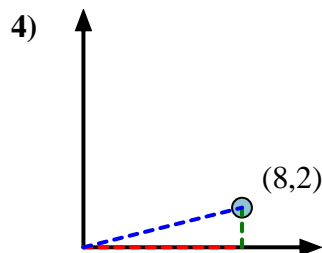
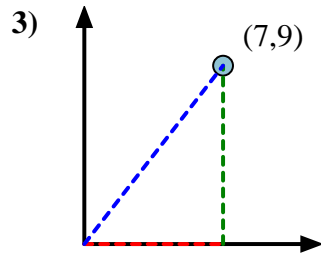
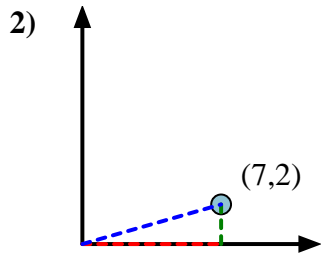
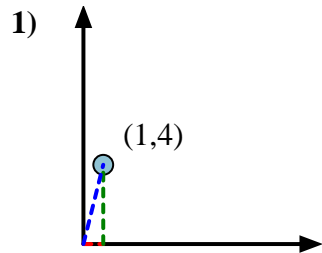


First find the slope.  
 $(y_2 - y_1) \div (x_2 - x_1) = m$   
 $(5 - 0) \div (4 - 0) = 1.25$

Then find the arc tangent (aka. inverse tangent) of the slope.  
 $\arctan(1.25) = 51.34^\circ$



**Answers**



1. 75.96
2. 15.95
3. 52.13
4. 14.04
5. 78.69
6. 49.40
7. 45.00
8. 30.96
9. 80.54
10. 36.87
11. 45.00
12. 50.19