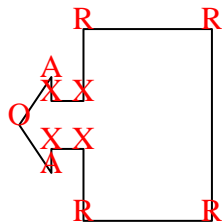


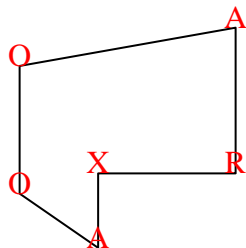


Count the number of Acute, Obtuse, Right and Reflex angles in each shape.

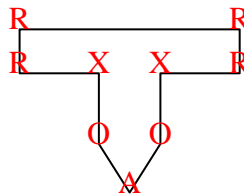
Ex)



1)



2)



Ex.

2 1 4 4

1.

2 2 1 1

2.

1 2 4 2

3.

0 2 3 0

4.

2 3 0 1

5.

1 1 2 0

6.

2 4 4 0

7.

0 0 6 0

8.

0 3 2 0

9.

2 2 1 2

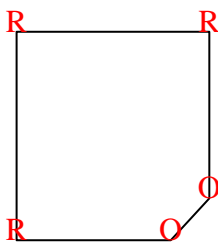
10.

1 3 4 3

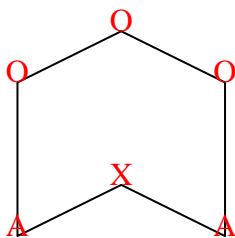
11.

2 2 0 0

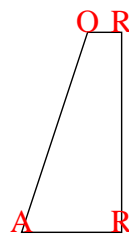
3)



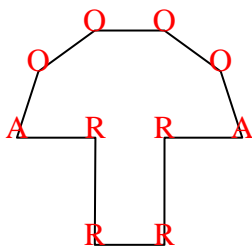
4)



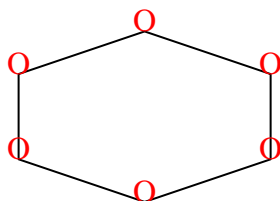
5)



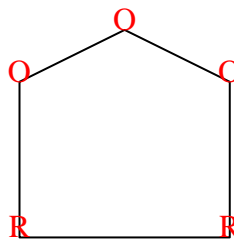
6)



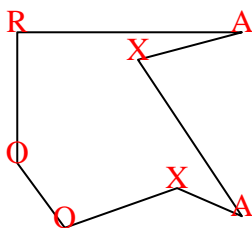
7)



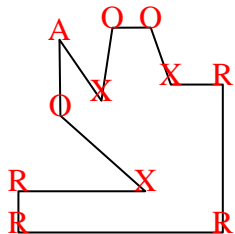
8)



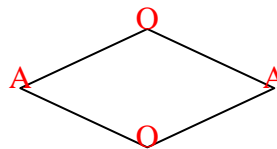
9)



10)



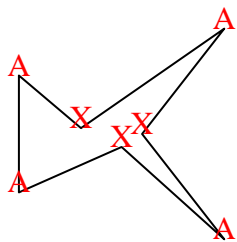
11)



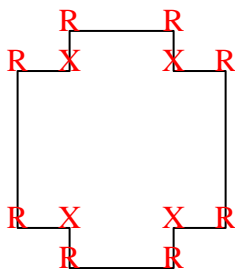


Count the number of Acute, Obtuse, Right and Reflex angles in each shape.

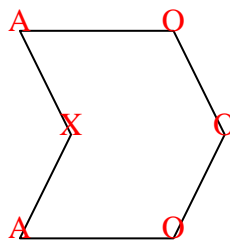
Ex)



1)



2)



Answers

Ex. 4 0 0 3

1. 0 0 8 4

2. 2 3 0 1

3. 2 2 0 0

4. 2 1 1 1

5. 2 1 4 4

6. 5 0 0 5

7. 0 3 2 0

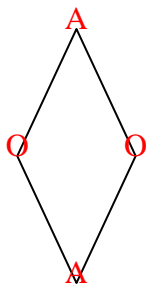
8. 4 2 0 4

9. 2 2 0 0

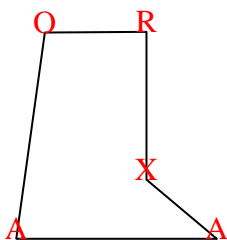
10. 0 0 4 0

11. 4 1 0 3

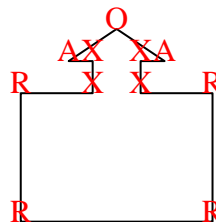
3)



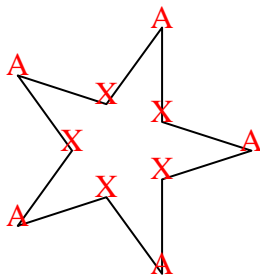
4)



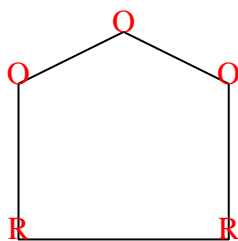
5)



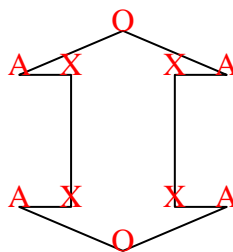
6)



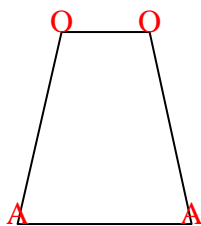
7)



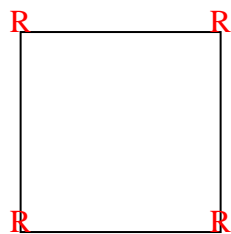
8)



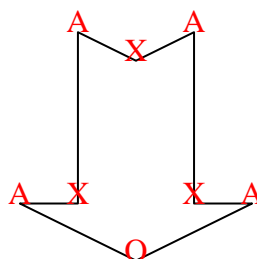
9)



10)



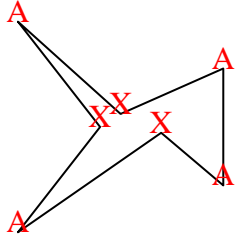
11)



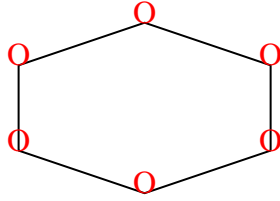


Count the number of Acute, Obtuse, Right and Reflex angles in each shape.

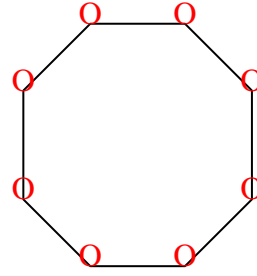
Ex)



1)



2)



Answers

Ex. 4 0 0 3

1. 0 0 6 0

2. 0 8 0 0

3. 1 1 3 1

4. 2 2 0 0

5. 0 0 8 4

6. 0 0 4 0

7. 2 2 1 2

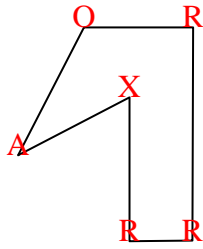
8. 2 2 0 0

9. 1 2 4 2

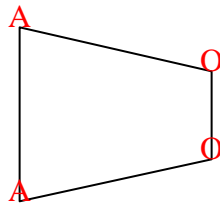
10. 2 3 0 1

11. 2 0 1 0

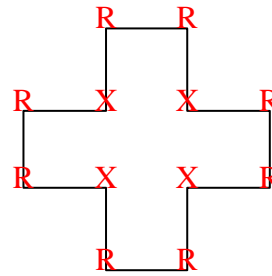
3)



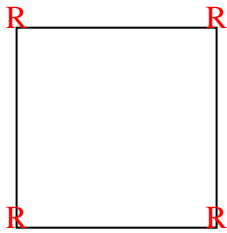
4)



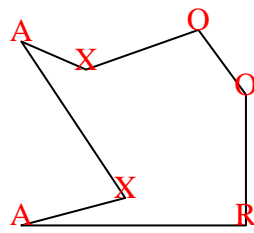
5)



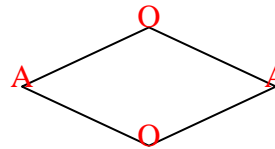
6)



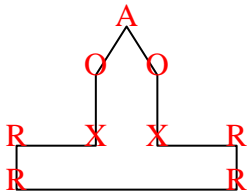
7)



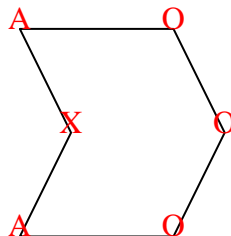
8)



9)



10)



11)

