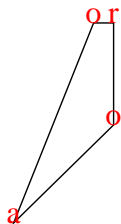




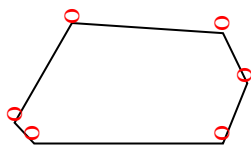


Count the number of Acute, Obtuse and Right angles inside each shape.

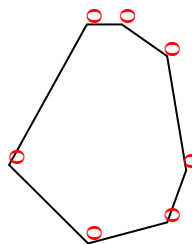
Ex)



1)



2)



Answers

Ex. 1 2 1

1. 0 6 0

2. 0 7 0

3. 0 2 3

4. 3 0 0

5. 1 3 1

6. 2 2 0

7. 0 2 3

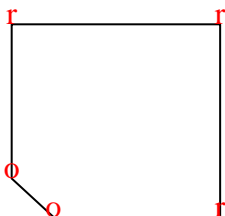
8. 2 2 0

9. 0 0 4

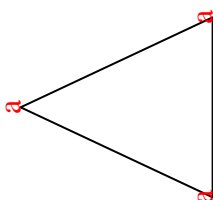
10. 0 0 4

11. 0 6 0

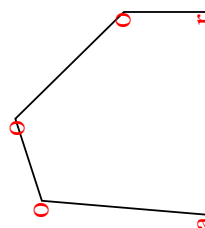
3)



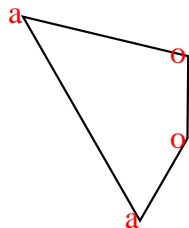
4)



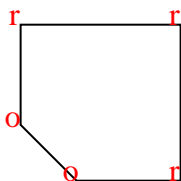
5)



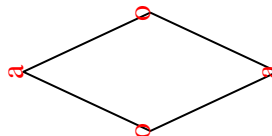
6)



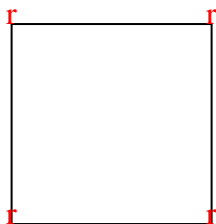
7)




8)



9)



10)



11)

