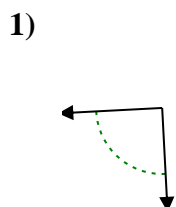





Determine if the angle shown is acute, obtuse, right or straight.

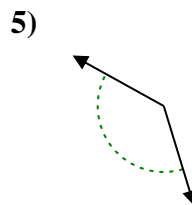
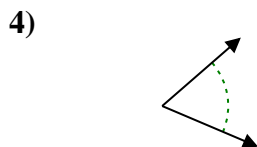
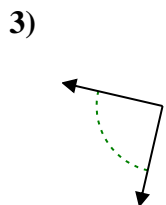
Answers



Ex. **acute**

1. _____

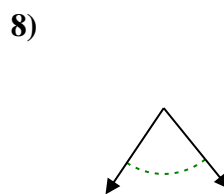
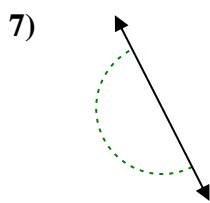
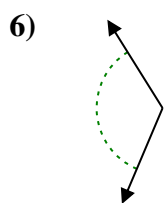
2. _____



3. _____

4. _____

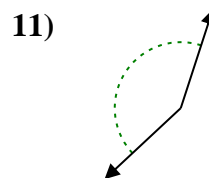
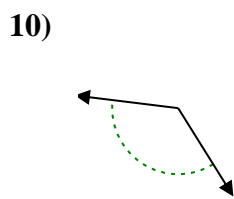
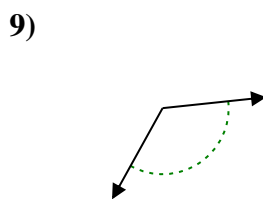
5. _____



6. _____

7. _____

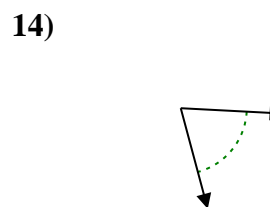
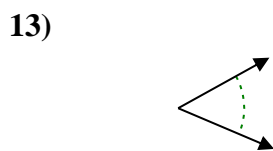
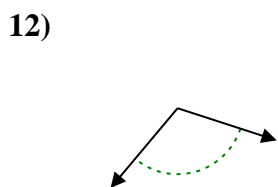
8. _____



9. _____

10. _____

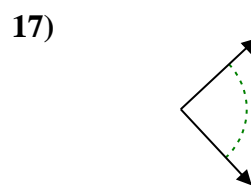
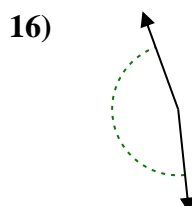
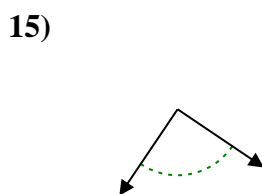
11. _____



12. _____

13. _____

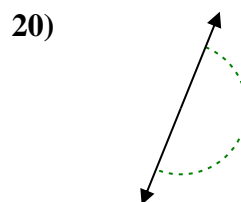
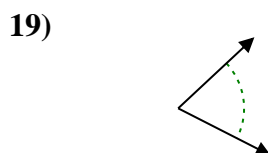
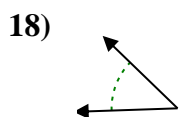
14. _____



15. _____

16. _____

17. _____



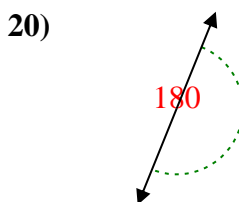
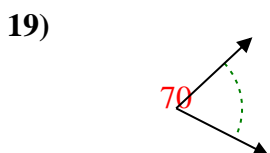
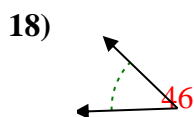
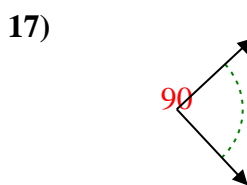
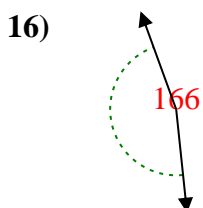
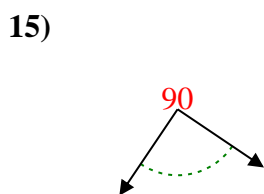
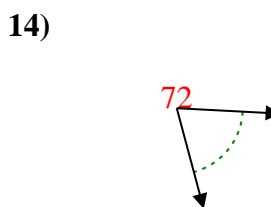
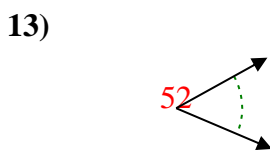
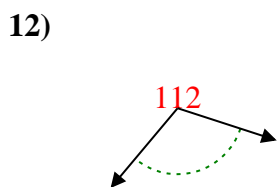
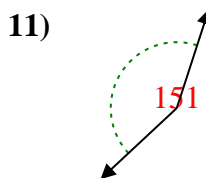
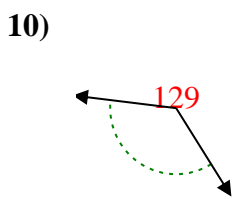
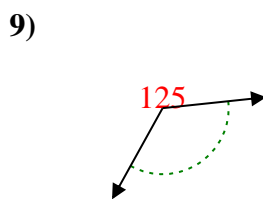
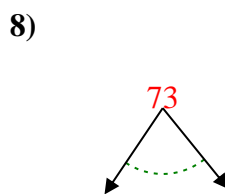
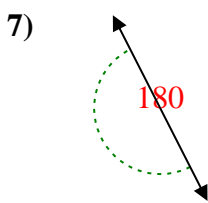
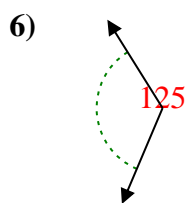
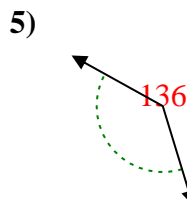
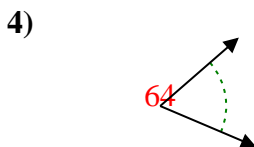
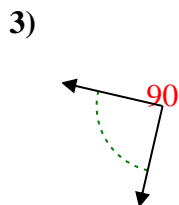
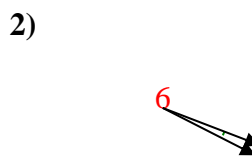
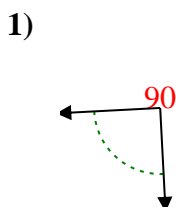
18. _____

19. _____

20. _____



Determine if the angle shown is acute, obtuse, right or straight.



Answers

Ex. **acute**

1. **right**

2. **acute**

3. **right**

4. **acute**

5. **obtuse**

6. **obtuse**

7. **straight**

8. **acute**

9. **obtuse**

10. **obtuse**

11. **obtuse**

12. **obtuse**

13. **acute**

14. **acute**

15. **right**

16. **obtuse**

17. **right**

18. **acute**

19. **acute**

20. **straight**