



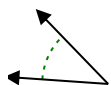
Determine if the angle shown is acute, obtuse, right or straight.

**Answers**

Ex)



1)



2)

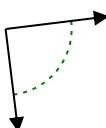


Ex. **acute**

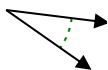
1. \_\_\_\_\_

2. \_\_\_\_\_

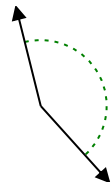
3)



4)



5)



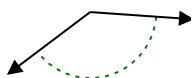
3. \_\_\_\_\_

4. \_\_\_\_\_

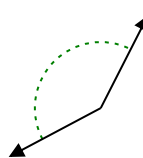
6)



7)



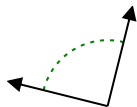
8)



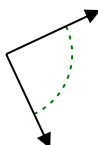
5. \_\_\_\_\_

6. \_\_\_\_\_

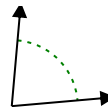
9)



10)



11)



7. \_\_\_\_\_

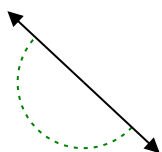
8. \_\_\_\_\_

9. \_\_\_\_\_

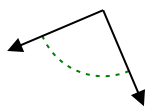
10. \_\_\_\_\_

11. \_\_\_\_\_

12)



13)



14)



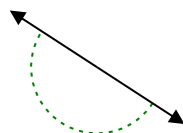
12. \_\_\_\_\_

13. \_\_\_\_\_

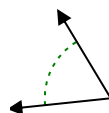
15)



16)



17)



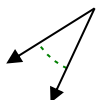
14. \_\_\_\_\_

15. \_\_\_\_\_

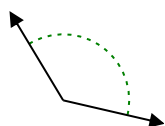
16. \_\_\_\_\_

17. \_\_\_\_\_

18)



19)



20)



18. \_\_\_\_\_

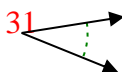
19. \_\_\_\_\_

20. \_\_\_\_\_

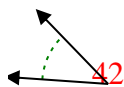


Determine if the angle shown is acute, obtuse, right or straight.

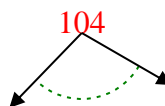
Ex)



1)



2)



Ex. **acute**

1. **acute**

2. **obtuse**

3. **right**

4. **acute**

5. **obtuse**

6. **acute**

7. **obtuse**

8. **obtuse**

9. **right**

10. **right**

11. **acute**

12. **straight**

13. **right**

14. **obtuse**

15. **obtuse**

16. **straight**

17. **acute**

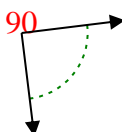
18. **acute**

19. **obtuse**

20. **obtuse**

20. **obtuse**

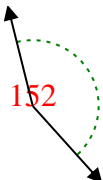
3)



4)



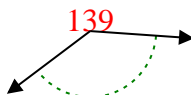
5)



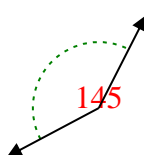
6)



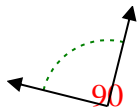
7)



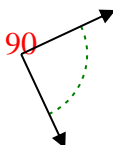
8)



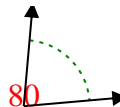
9)



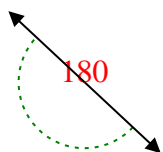
10)



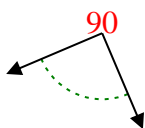
11)



12)



13)



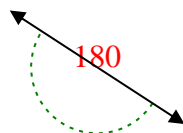
14)



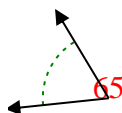
15)



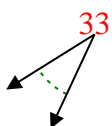
16)



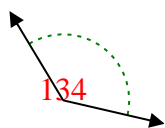
17)



18)



19)



20)

