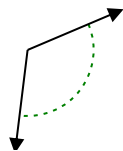




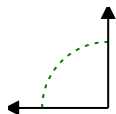
Determine if the angle shown is acute, obtuse, right or straight.

Answers

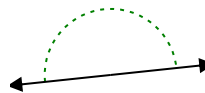
Ex)



1)



2)

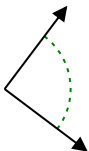


Ex. **obtuse**

1. _____

2. _____

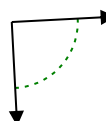
3)



4)



5)



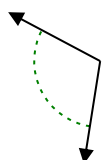
3. _____

4. _____

6)



7)



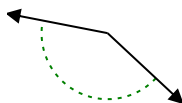
8)



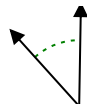
5. _____

6. _____

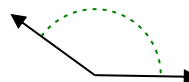
9)



10)



11)



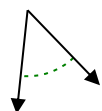
7. _____

8. _____

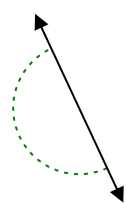
9. _____

10. _____

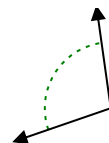
12)



13)



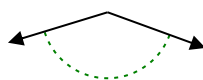
14)



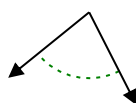
11. _____

12. _____

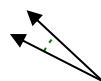
15)



16)



17)



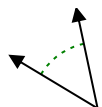
13. _____

14. _____

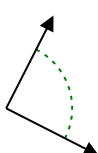
15. _____

16. _____

18)



19)



20)



17. _____

18. _____

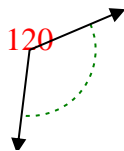
19. _____

20. _____

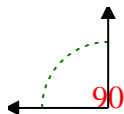


Determine if the angle shown is acute, obtuse, right or straight.

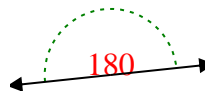
Ex)



1)



2)



Answers

Ex. **obtuse**

1. **right**

2. **straight**

3. **right**

4. **acute**

5. **right**

6. **obtuse**

7. **obtuse**

8. **acute**

9. **obtuse**

10. **acute**

11. **obtuse**

12. **acute**

13. **straight**

14. **obtuse**

15. **obtuse**

16. **acute**

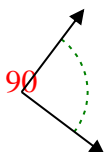
17. **acute**

18. **acute**

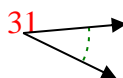
19. **right**

20. **acute**

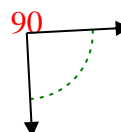
3)



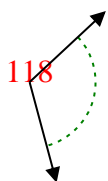
4)



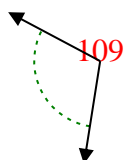
5)



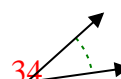
6)



7)



8)



9)



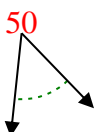
10)



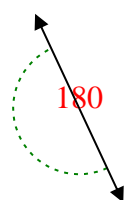
11)



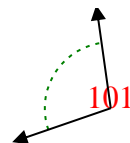
12)



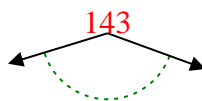
13)



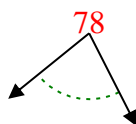
14)



15)



16)



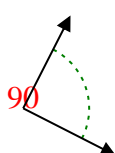
17)



18)



19)



20)

