



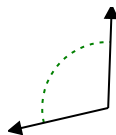
Determine if the angle shown is acute, obtuse, right or straight.

Answers

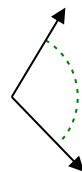
Ex)



1)



2)

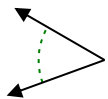


Ex. **right**

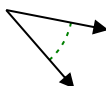
1. _____

2. _____

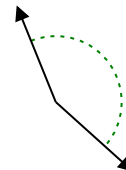
3)



4)



5)



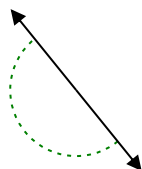
3. _____

4. _____

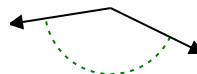
6)



7)



8)

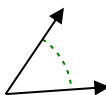


5. _____

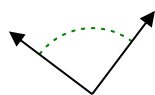
6. _____

7. _____

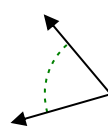
9)



10)



11)

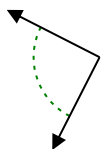


8. _____

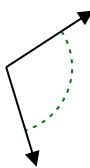
9. _____

10. _____

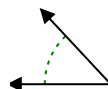
12)



13)



14)



11. _____

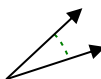
12. _____

13. _____

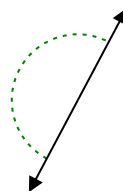
15)



16)



17)

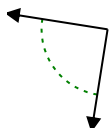


14. _____

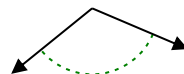
15. _____

16. _____

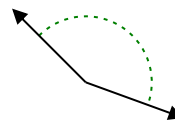
18)



19)



20)



17. _____

18. _____

19. _____

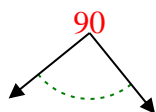
20. _____

20. _____

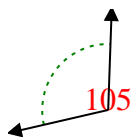


Determine if the angle shown is acute, obtuse, right or straight.

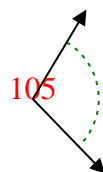
Ex)



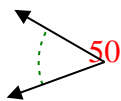
1)



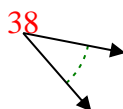
2)



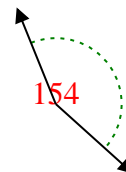
3)



4)



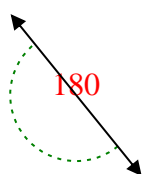
5)



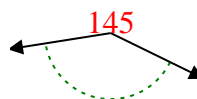
6)



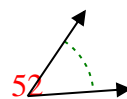
7)



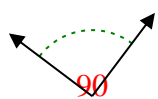
8)



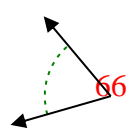
9)



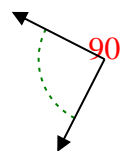
10)



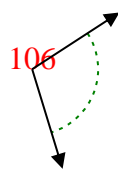
11)



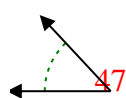
12)




13)



14)



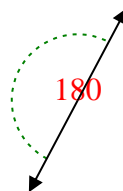
15)



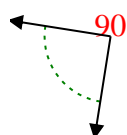
16)



17)



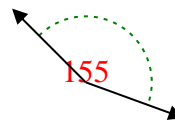
18)



19)



20)



Answers

Ex. **right**

1. **obtuse**

2. **obtuse**

3. **acute**

4. **acute**

5. **obtuse**

6. **acute**

7. **straight**

8. **obtuse**

9. **acute**

10. **right**

11. **acute**

12. **right**

13. **obtuse**

14. **acute**

15. **acute**

16. **acute**

17. **straight**

18. **right**

19. **obtuse**

20. **obtuse**

1-10	95	90	85	80	75	70	65	60	55	50
11-20	45	40	35	30	25	20	15	10	5	0