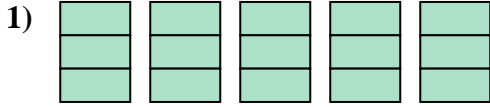


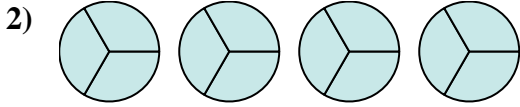


Write the shaded amount as a fraction.

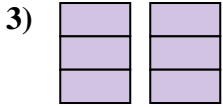
Answers



1. \_\_\_\_\_

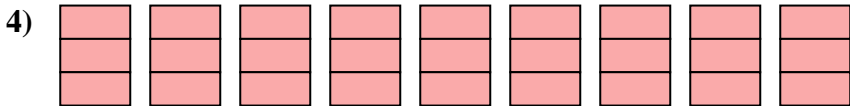


2. \_\_\_\_\_

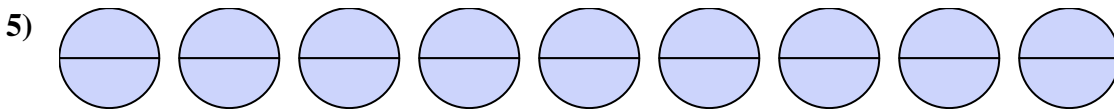


3. \_\_\_\_\_

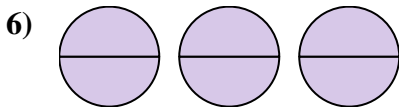
4. \_\_\_\_\_



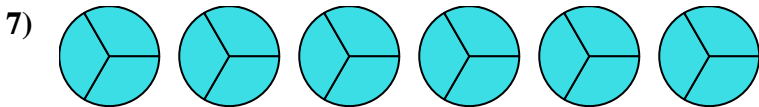
5. \_\_\_\_\_



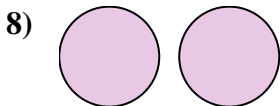
6. \_\_\_\_\_



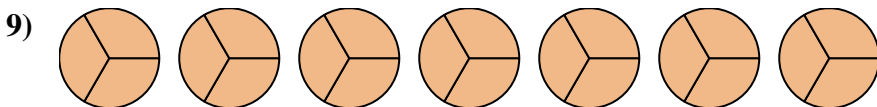
7. \_\_\_\_\_



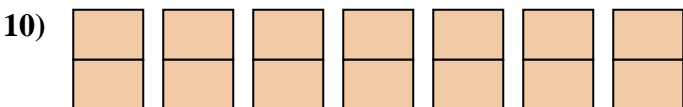
8. \_\_\_\_\_



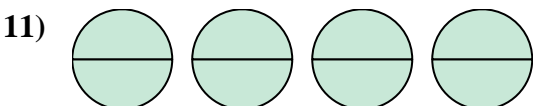
9. \_\_\_\_\_



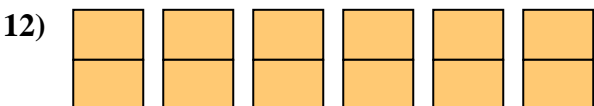
10. \_\_\_\_\_



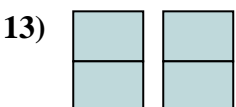
11. \_\_\_\_\_



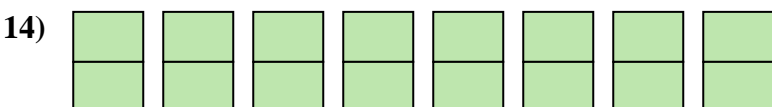
12. \_\_\_\_\_



13. \_\_\_\_\_

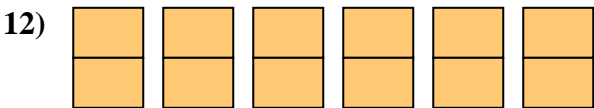
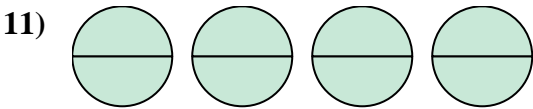
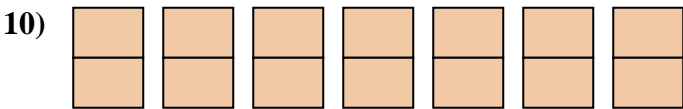
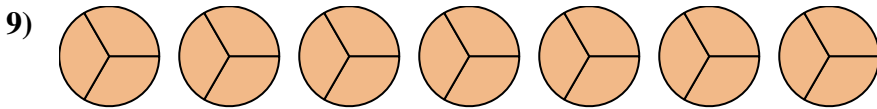
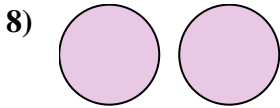
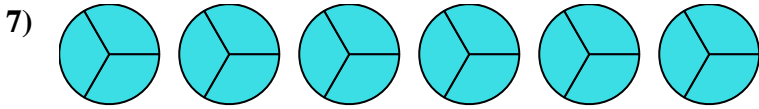
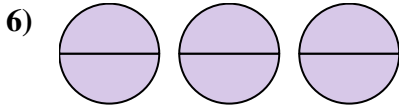
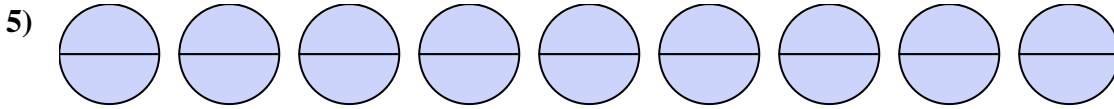
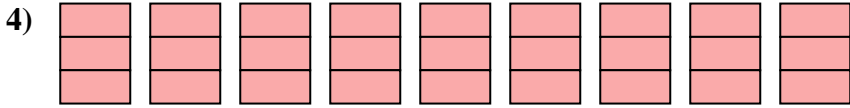
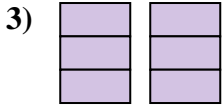
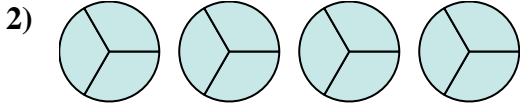
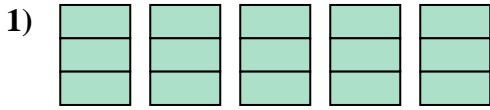


14. \_\_\_\_\_





Write the shaded amount as a fraction.



Answers

1.  $\frac{15}{3}$

2.  $\frac{12}{3}$

3.  $\frac{6}{3}$

4.  $\frac{27}{3}$

5.  $\frac{18}{2}$

6.  $\frac{6}{2}$

7.  $\frac{18}{3}$

8.  $\frac{2}{1}$

9.  $\frac{21}{3}$

10.  $\frac{14}{2}$

11.  $\frac{8}{2}$

12.  $\frac{12}{2}$

13.  $\frac{4}{2}$

14.  $\frac{16}{2}$