


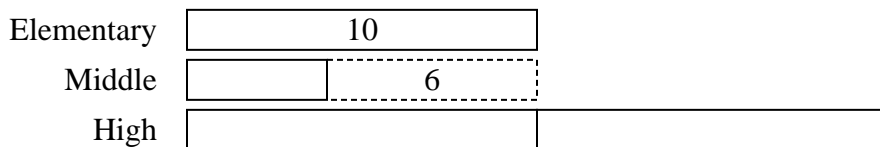


Solve each problem using a tape diagram.


- 1) In April, Larry's Lawn Care mowed 16 lawns. They mowed 4 times as many in May and 10 fewer in June. How many lawns did they mow over those three months?



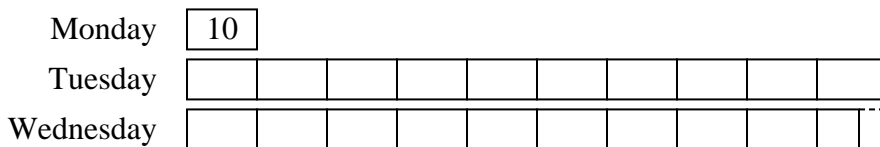
- 2) In a school district the elementary school earned \$10 fundraising. The high school earned 2 times as much as the elementary school and the middle school earned \$6 less than the elementary. How much did they earn total?



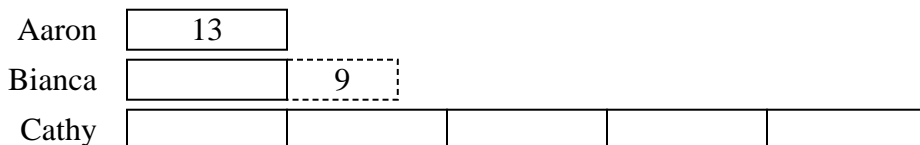
- 3) A musician spent 16 hours practicing in January. In February he practiced for 5 hours longer than he did in January. Then in March he practiced for 5 times as long as January. How hours did he spend practicing?



- 4) Kaleb was reading a book. He read 10 pages on Monday and 10 times as many pages on Tuesday. On Wednesday he read 4 fewer pages than the amount he read on Tuesday. How many pages did he read total?



- 5) While playing a video game Aaron, Bianca and Cathy counted the enemies they defeated. Aaron defeated 13. Bianca defeated 9 more than Aaron. And Cathy defeated 5 times as many as Aaron. How many enemies did they defeat total?



Answers

1. 86

2. 34

3. 117

4. 206

5. 100