



Solve each problem using a tape diagram.

Answers

- 1) A pizzeria owner sold 152 pizzas on Friday. $\frac{5}{8}$ of all the pizzas sold were pepperoni. $\frac{1}{3}$ of the rest sold were cheese. How many pizzas did he sell that weren't pepperoni or cheese?

- 2) On Carol's phone $\frac{1}{5}$ of the pictures were selfies. Of the other pictures on her phone $\frac{3}{4}$ were of her cat. If she has 465 pictures on her phone, how many are not of her cat or selfies?

- 3) At Maria's Ice Cream Emporium they sold 95 ice cream cones in a day. $\frac{3}{5}$ of them sold were chocolate. $\frac{1}{2}$ of the ones that weren't chocolate were vanilla. And the remaining were pistachio. How many pistachio cones did they sell?

- 4) A store started with 96 sodas. They sold $\frac{3}{6}$ of them over the next month and they had to throw out $\frac{1}{3}$ of the ones that were left because they were expired. How many sodas did they have at the end?

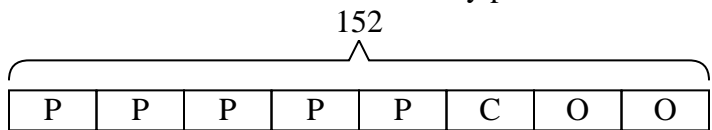
- 5) A game store had 135 amiibo they were trying to sell. They sold $\frac{2}{5}$ at normal price. Then they sold $\frac{1}{3}$ of the ones that were left at a discount. How many amiibo did they have left after selling the discount ones?

1. _____
2. _____
3. _____
4. _____
5. _____



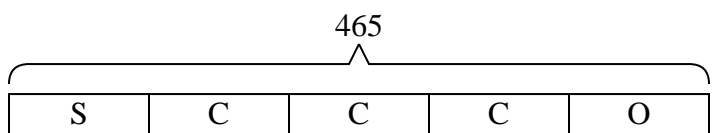
Solve each problem using a tape diagram.

- 1) A pizzeria owner sold 152 pizzas on Friday. $\frac{5}{8}$ of all the pizzas sold were pepperoni. $\frac{1}{3}$ of the rest sold were cheese. How many pizzas did he sell that weren't pepperoni or cheese?



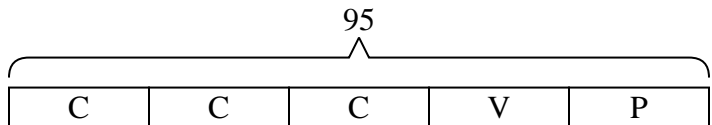
O = Other
P = Pepperoni
C = Cheese

- 2) On Carol's phone $\frac{1}{5}$ of the pictures were selfies. Of the other pictures on her phone $\frac{3}{4}$ were of her cat. If she has 465 pictures on her phone, how many are not of her cat or selfies?



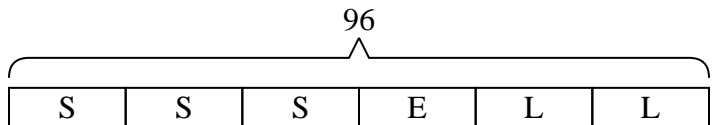
O = Other
S = Selfies
C = Cat

- 3) At Maria's Ice Cream Emporium they sold 95 ice cream cones in a day. $\frac{3}{5}$ of them sold were chocolate. $\frac{1}{2}$ of the ones that weren't chocolate were vanilla. And the remaining were pistachio. How many pistachio cones did they sell?



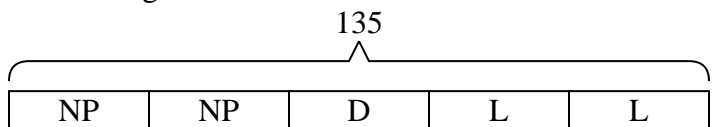
P = Pistachio
C = Chocolate
V = Vanilla

- 4) A store started with 96 sodas. They sold $\frac{3}{6}$ of them over the next month and they had to throw out $\frac{1}{3}$ of the ones that were left because they were expired. How many sodas did they have at the end?



L = Left
S = Sold
E = Expired

- 5) A game store had 135 amiibo they were trying to sell. They sold $\frac{2}{5}$ at normal price. Then they sold $\frac{1}{3}$ of the ones that were left at a discount. How many amiibo did they have left after selling the discount ones?



L = Left
NP = normal
D = Discount

Answers

1. **38**

2. **93**

3. **19**

4. **32**

5. **54**