



Solve each problem.

Answers

1) A clown gave away 20 balloons to girls and 27 balloons to boys. How many balloons did he give away total?

1. _____

2) On Facebook Robin had 26 photos of her friends and 48 photos of her family. How many photos did she have total?

2. _____

3) A pet store had 22 birds that talked and 17 that didn't. How many birds did the pet store have total?

3. _____

4. _____

4) Carol had 29 DS games and her friend had 42 games. How many do they have total?

5. _____

6. _____

5) A restaurant sold 41 sodas in the morning and 50 in the afternoon. How many sodas did they sell total?

7. _____

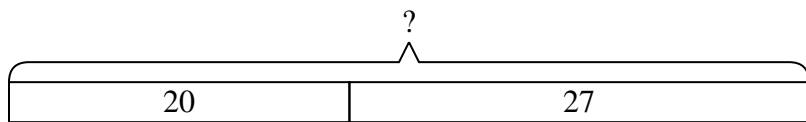
6) For Halloween Tom got 35 ounces of candy and Vanessa got 12 ounces of candy. What is the combined weight they received?

7) A store sold 43 cold drinks and 33 hot drinks. How many drinks did they sell total?

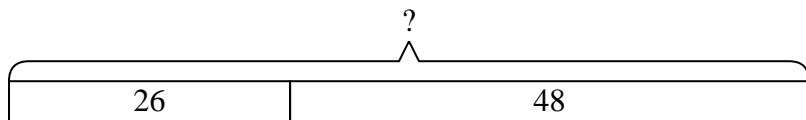


Solve each problem.

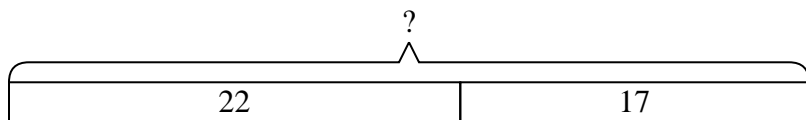
- 1) A clown gave away 20 balloons to girls and 27 balloons to boys. How many balloons did he give away total?



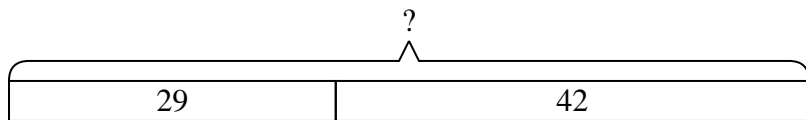
- 2) On Facebook Robin had 26 photos of her friends and 48 photos of her family. How many photos did she have total?



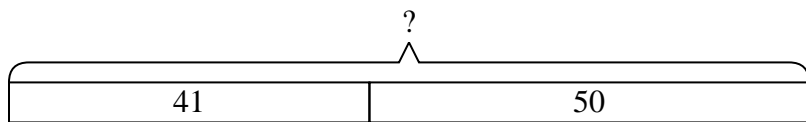
- 3) A pet store had 22 birds that talked and 17 that didn't. How many birds did the pet store have total?



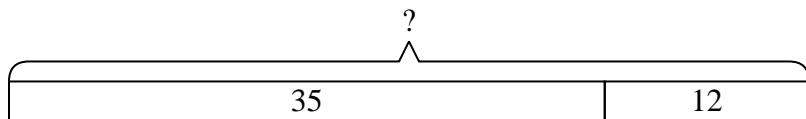
- 4) Carol had 29 DS games and her friend had 42 games. How many do they have total?



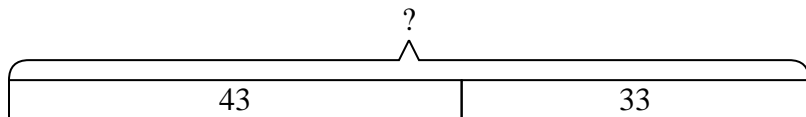
- 5) A restaurant sold 41 sodas in the morning and 50 in the afternoon. How many sodas did they sell total?



- 6) For Halloween Tom got 35 ounces of candy and Vanessa got 12 ounces of candy. What is the combined weight they received?



- 7) A store sold 43 cold drinks and 33 hot drinks. How many drinks did they sell total?



Answers

1. 47

2. 74

3. 39

4. 71

5. 91

6. 47

7. 76