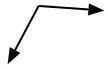




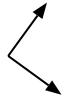
Determine if the angle shown is 'less', 'more' or 'equal' to 90°.

Answers

Ex)



1)



2)



Ex. more

1. _____

2. _____

3)



4)



5)



3. _____

4. _____

6)



7)



8)



5. _____

6. _____

7. _____

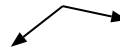
9)



10)



11)

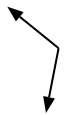


8. _____

9. _____

10. _____

12)



13)



14)



11. _____

12. _____

13. _____

15)



16)



17)



14. _____

15. _____

16. _____

18)



19)



20)



17. _____

18. _____

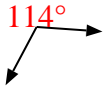
19. _____

20. _____



Determine if the angle shown is 'less', 'more' or 'equal' to 90°.

Ex)



1)



2)



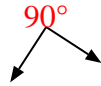
Answers

Ex. more

3)



4)

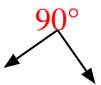


5)



1. equal

6)



7)



8)



2. less

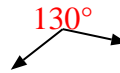
9)



10)

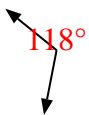


11)



3. less

12)



13)



14)



4. equal

15)



16)



17)



5. less

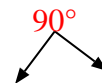
18)



19)



20)



6. equal

7. more

8. less

9. less

10. less

11. more

12. more

13. equal

14. equal

15. equal

16. less

17. equal

18. less

19. more

20. equal