



Determine if the angle shown is 'less', 'more' or 'equal' to 90°.

Answers

Ex)



1)



2)



Ex. **equal**

1. _____

2. _____

3)



4)



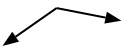
5)



3. _____

4. _____

6)



7)



8)



5. _____

6. _____

7. _____

9)



10)



11)



8. _____

9. _____

10. _____

12)



13)



14)



11. _____

12. _____

13. _____

15)



16)



17)



14. _____

15. _____

16. _____

18)



19)



20)



17. _____

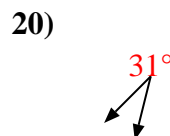
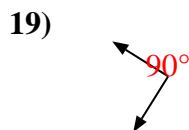
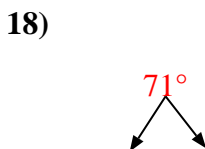
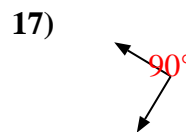
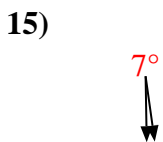
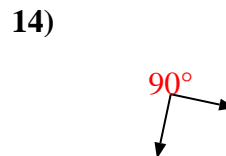
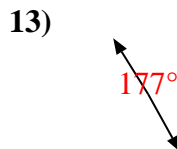
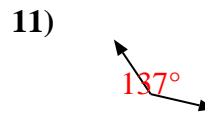
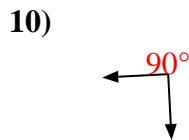
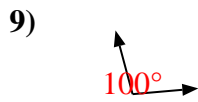
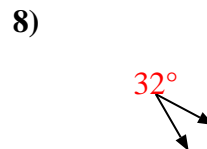
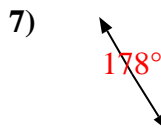
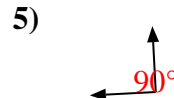
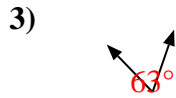
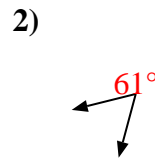
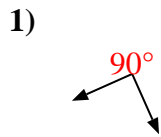
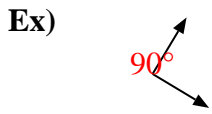
18. _____

19. _____

20. _____



Determine if the angle shown is 'less', 'more' or 'equal' to 90°.



Answers

Ex. equal

1. equal

2. less

3. less

4. equal

5. equal

6. more

7. more

8. less

9. more

10. equal

11. more

12. less

13. more

14. equal

15. less

16. more

17. equal

18. less

19. equal

20. less