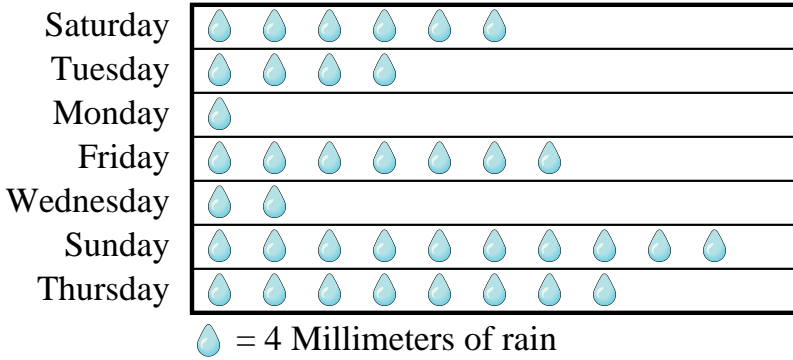




Answers

Mr. Sanders class was performing an experiment to see which day of the week had the most rain. His class recorded their information in the pictograph below.

Millimeters of Rain

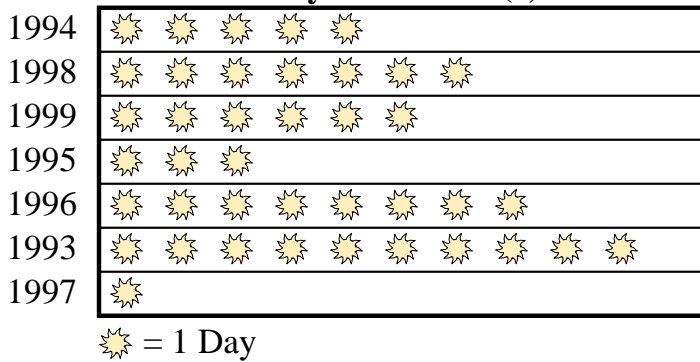


- Which day had the least rain?
- Which day was there exactly 28 millimeters of rain?
- Did it rain more on Saturday or Tuesday?
- How much rain was there on Monday?
- Which day had the most rain?

- _____
- _____
- _____
- _____
- _____
- _____
- _____
- _____
- _____
- _____

A weatherman was recording the number of days where the temperature was over 90°. He recorded the information in the pictograph below.

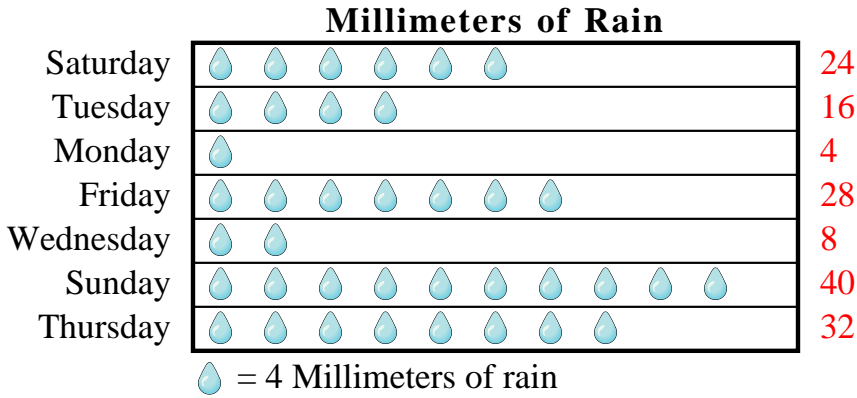
Days over 90° (f)



- Which year had the most days where the temperature was over 90°?
- How many days was the temperature over 90° in 1999?
- Which year had more days over 90°, 1994 or 1998?
- Which year had the fewest days where the temperature was over 90°?
- Which year had exactly 3 days over 90°?

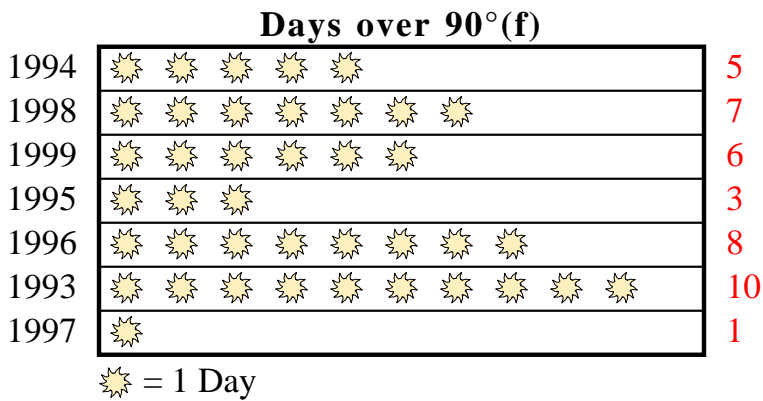


Mr. Sanders class was performing an experiment to see which day of the week had the most rain. His class recorded their information in the pictograph below.



- Which day had the least rain?
- Which day was there exactly 28 millimeters of rain?
- Did it rain more on Saturday or Tuesday?
- How much rain was there on Monday?
- Which day had the most rain?

A weatherman was recording the number of days where the temperature was over 90°. He recorded the information in the pictograph below.



- Which year had the most days where the temperature was over 90°?
- How many days was the temperature over 90° in 1999?
- Which year had more days over 90°, 1994 or 1998?
- Which year had the fewest days where the temperature was over 90°?
- Which year had exactly 3 days over 90°?

Answers

- Monday
- Friday
- Saturday
- 4
- Sunday
- 1993
- 6
- 1998
- 1997
- 1995