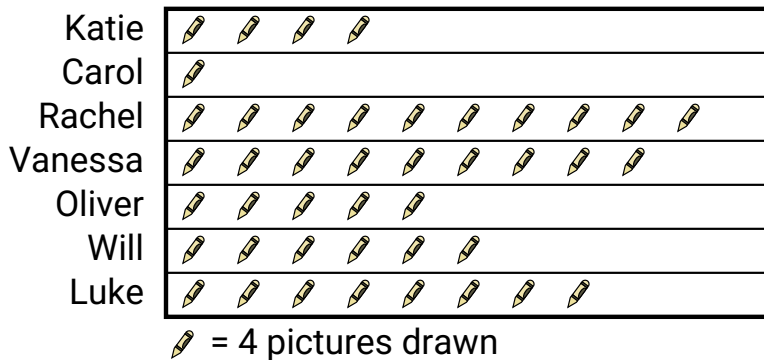


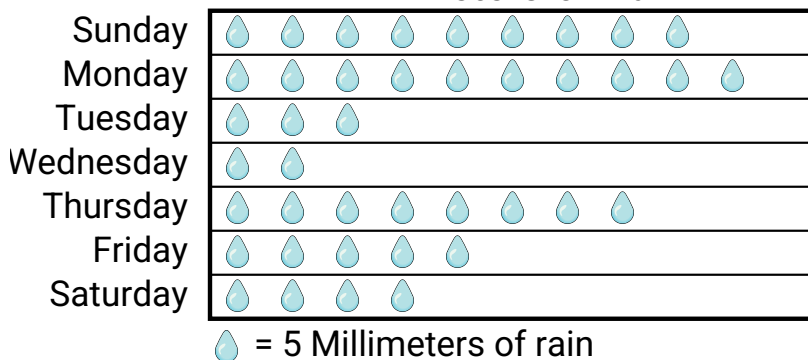


Several students were helping to decorate the school halls by drawing pictures to hang up. The pictograph below shows the number of pictures each student drew.

Pictures Drawn

- 1) Did Katie or Carol draw more pictures?
- 2) How many pictures did Rachel draw?
- 3) Who drew exactly 36 pictures?
- 4) Who drew the most pictures?
- 5) Who drew the fewest pictures?

Mr. Sanders class was performing an experiment to see which day of the week had the most rain. His class recorded their information in the pictograph below.

Millimeters of Rain

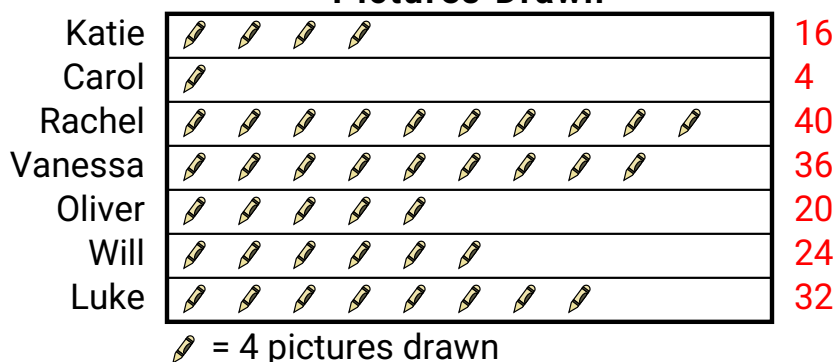
- 6) Did it rain more on Sunday or Monday?
- 7) Which day had the least rain?
- 8) Which day was there exactly 10 millimeters of rain?
- 9) Which day had the most rain?
- 10) How much rain was there on Tuesday?

Answers

1. _____
2. _____
3. _____
4. _____
5. _____
6. _____
7. _____
8. _____
9. _____
10. _____

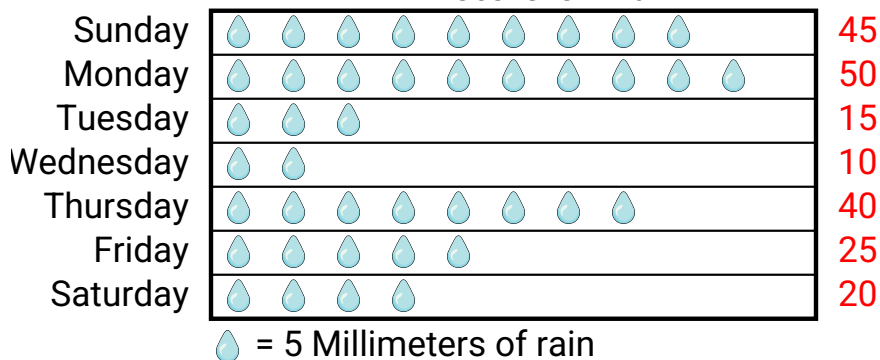


Several students were helping to decorate the school halls by drawing pictures to hang up. The pictograph below shows the number of pictures each student drew.

Pictures Drawn

- 1) Did Katie or Carol draw more pictures?
- 2) How many pictures did Rachel draw?
- 3) Who drew exactly 36 pictures?
- 4) Who drew the most pictures?
- 5) Who drew the fewest pictures?

Mr. Sanders class was performing an experiment to see which day of the week had the most rain. His class recorded their information in the pictograph below.

Millimeters of Rain

- 6) Did it rain more on Sunday or Monday?
- 7) Which day had the least rain?
- 8) Which day was there exactly 10 millimeters of rain?
- 9) Which day had the most rain?
- 10) How much rain was there on Tuesday?

Answers

1. **Katie**
2. **40**
3. **Vanessa**
4. **Rachel**
5. **Carol**
6. **Monday**
7. **Wednesday**
8. **Wednesday**
9. **Monday**
10. **15**