

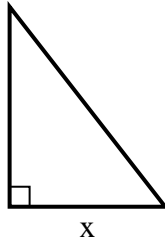


Find the value of X.

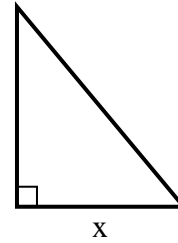
1) area = $9 u^2$



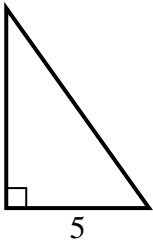
2) area = $31.5 u^2$



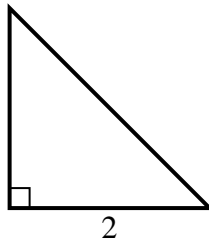
3) area = $15 u^2$



4) area = $17.5 u^2$



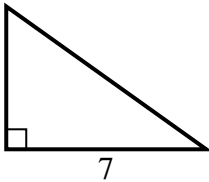
5) area = $2 u^2$



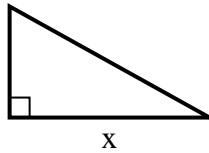
6) area = $10.5 u^2$



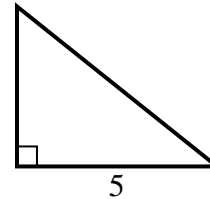
7) area = $17.5 u^2$



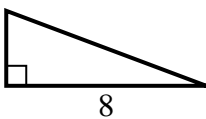
8) area = $22.5 u^2$



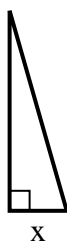
9) area = $10 u^2$



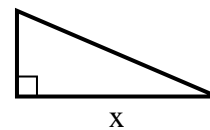
10) area = $12 u^2$



11) area = $7 u^2$



12) area = $10.5 u^2$



Answers

1. _____
2. _____
3. _____
4. _____
5. _____
6. _____
7. _____
8. _____
9. _____
10. _____
11. _____
12. _____

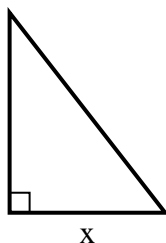


Find the value of X.

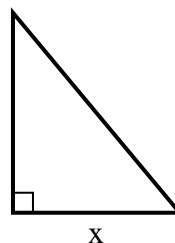
1) area = $9 u^2$



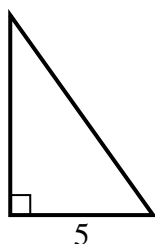
2) area = $31.5 u^2$



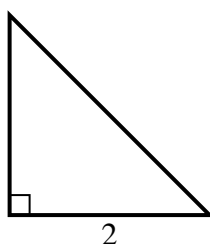
3) area = $15 u^2$



4) area = $17.5 u^2$



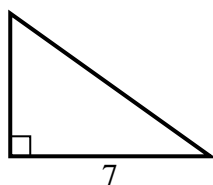
5) area = $2 u^2$



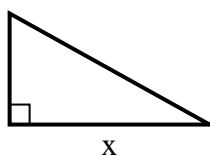
6) area = $10.5 u^2$



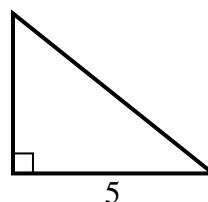
7) area = $17.5 u^2$



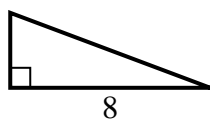
8) area = $22.5 u^2$



9) area = $10 u^2$



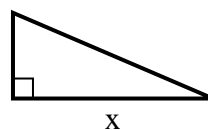
10) area = $12 u^2$



11) area = $7 u^2$



12) area = $10.5 u^2$



Answers

1. 9

2. 7

3. 5

4. 7

5. 2

6. 7

7. 5

8. 9

9. 4

10. 3

11. 2

12. 7