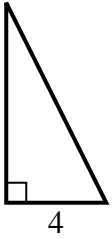


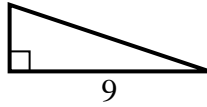


Find the value of X.

1) area =  $16 u^2$



2) area =  $13.5 u^2$



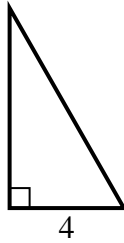
3) area =  $6 u^2$



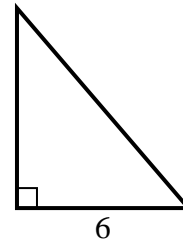
4) area =  $8 u^2$



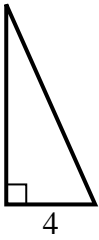
5) area =  $14 u^2$



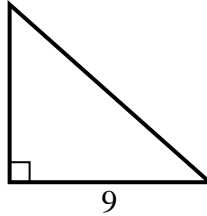
6) area =  $21 u^2$



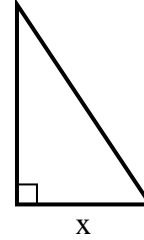
7) area =  $18 u^2$



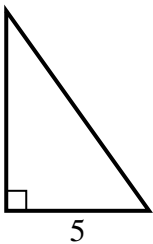
8) area =  $36 u^2$



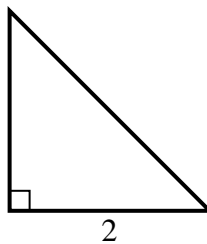
9) area =  $27 u^2$



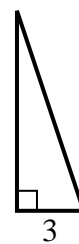
10) area =  $17.5 u^2$



11) area =  $2 u^2$



12) area =  $13.5 u^2$



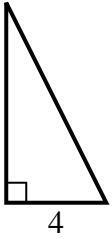
**Answers**

1. \_\_\_\_\_
2. \_\_\_\_\_
3. \_\_\_\_\_
4. \_\_\_\_\_
5. \_\_\_\_\_
6. \_\_\_\_\_
7. \_\_\_\_\_
8. \_\_\_\_\_
9. \_\_\_\_\_
10. \_\_\_\_\_
11. \_\_\_\_\_
12. \_\_\_\_\_

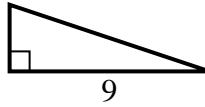


Find the value of X.

1) area =  $16 u^2$



2) area =  $13.5 u^2$



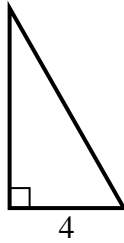
3) area =  $6 u^2$



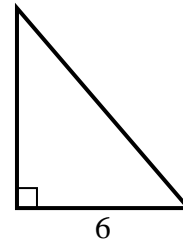
4) area =  $8 u^2$



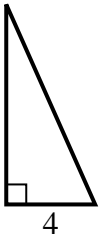
5) area =  $14 u^2$



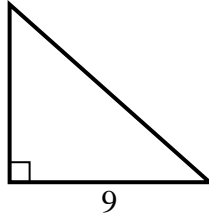
6) area =  $21 u^2$



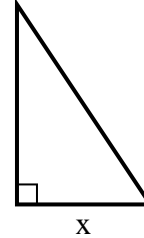
7) area =  $18 u^2$



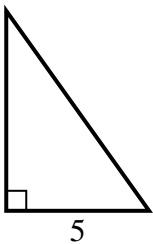
8) area =  $36 u^2$



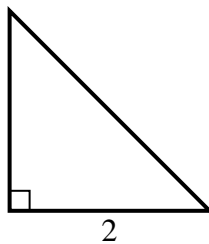
9) area =  $27 u^2$



10) area =  $17.5 u^2$



11) area =  $2 u^2$



12) area =  $13.5 u^2$



Answers

1. 8

2. 3

3. 2

4. 2

5. 7

6. 7

7. 9

8. 8

9. 6

10. 7

11. 2

12. 9