



Determine which letter best represents the weight.

Gram (g)

A gram is about the weight of a paperclip.



Kilogram (kg)

A kilogram is about the weight of a thick book.




Remember:

Kilo means 1,000. So a kilogram is 1,000 grams.
1 Kilogram is also about the same weight as 2 pounds.

Answers

1. _____
2. _____
3. _____
4. _____
5. _____
6. _____
7. _____
8. _____
9. _____

1)



Can of Soda

- A. 500 kilograms
- B. 2 kilograms
- C. 250 grams
- D. 1 gram


2)



Monitor

- A. 8 kilograms
- B. 500 grams
- C. 500 kilograms
- D. 8 grams

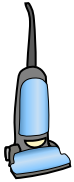
3)



Notebook Paper

- A. 85 grams
- B. 3 grams
- C. 1 kilogram
- D. 500 grams


4)



Vacuum

- A. 500 kilograms
- B. 90 grams
- C. 50 grams
- D. 20 kilograms


5)



Lollipop

- A. 200 grams
- B. 200 kilograms
- C. 5 kilograms
- D. 20 grams

6)



Adult Horse

- A. 400 grams
- B. 30 kilograms
- C. 30 grams
- D. 400 kilograms

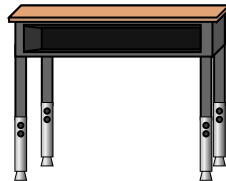
7)



Pencil

- A. 20 kilograms
- B. 1 gram
- C. 20 grams
- D. 1 kilogram

8)



Desk

- A. 300 grams
- B. 300 kilograms
- C. 15 grams
- D. 15 kilograms

9)



Candle

- A. 500 grams
- B. 10 kilograms
- C. 2 kilograms
- D. 4 grams



Determine which letter best represents the weight.

Gram (g)

A gram is about the weight of a paperclip.



Kilogram (kg)

A kilogram is about the weight of a thick book.




Remember:

Kilo means 1,000. So a kilogram is 1,000 grams.

1 Kilogram is also about the same weight as 2 pounds.

Answers

1)



Can of Soda

- A. 500 kilograms
- B. 2 kilograms
- C. 250 grams
- D. 1 gram


2)



Monitor

- A. 8 kilograms
- B. 500 grams
- C. 500 kilograms
- D. 8 grams

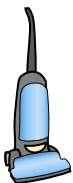
3)



Notebook Paper

- A. 85 grams
- B. 3 grams
- C. 1 kilogram
- D. 500 grams


4)



Vacuum

- A. 500 kilograms
- B. 90 grams
- C. 50 grams
- D. 20 kilograms


5)



Lollipop

- A. 200 grams
- B. 200 kilograms
- C. 5 kilograms
- D. 20 grams

6)



Adult Horse

- A. 400 grams
- B. 30 kilograms
- C. 30 grams
- D. 400 kilograms

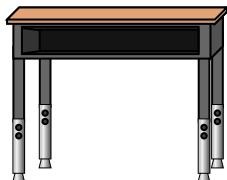
7)



Pencil

- A. 20 kilograms
- B. 1 gram
- C. 20 grams
- D. 1 kilogram

8)



Desk

- A. 300 grams
- B. 300 kilograms
- C. 15 grams
- D. 15 kilograms

9)



Candle

- A. 500 grams
- B. 10 kilograms
- C. 2 kilograms
- D. 4 grams

- 1. **C**
- 2. **A**
- 3. **B**
- 4. **D**
- 5. **D**
- 6. **D**
- 7. **C**
- 8. **D**
- 9. **D**