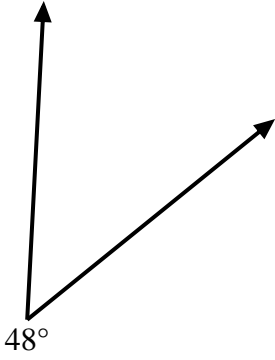


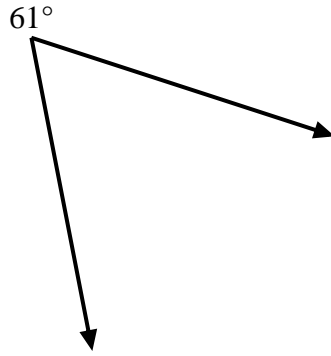


Use a protractor to create a triangle from the figure shown. Answer with the missing angles. Answers will vary.

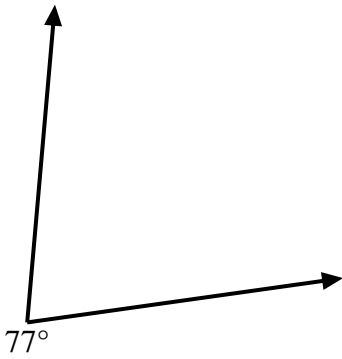
1)



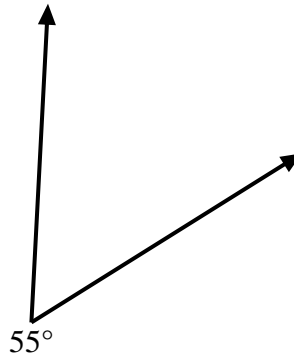
2)



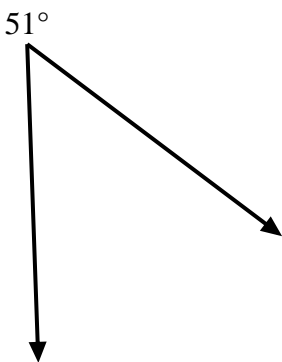
3)



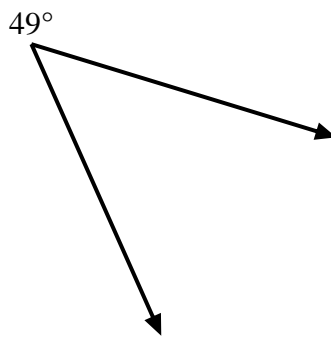
4)



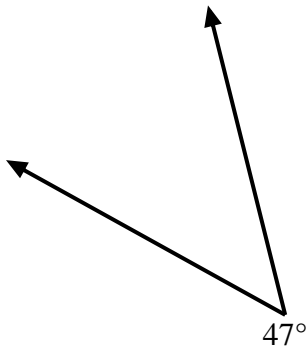
5)



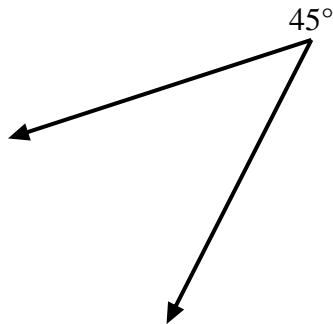
6)



7)



8)



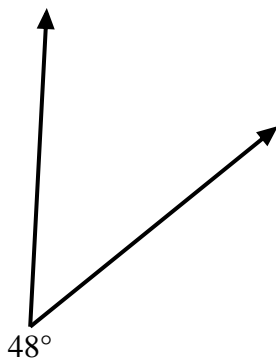
Answers

- 1. \_\_\_\_\_
- 2. \_\_\_\_\_
- 3. \_\_\_\_\_
- 4. \_\_\_\_\_
- 5. \_\_\_\_\_
- 6. \_\_\_\_\_
- 7. \_\_\_\_\_
- 8. \_\_\_\_\_

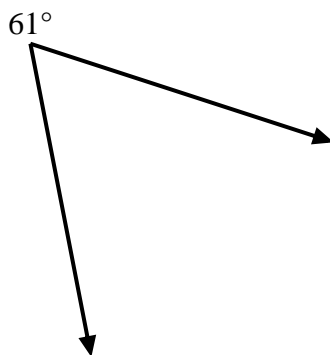


Use a protractor to create a triangle from the figure shown. Answer with the missing angles. Answers will vary.

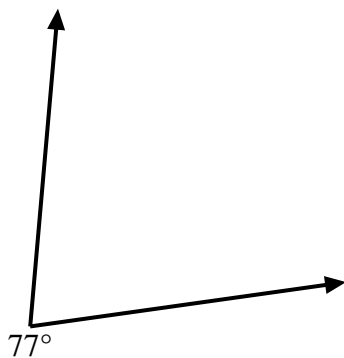
1)



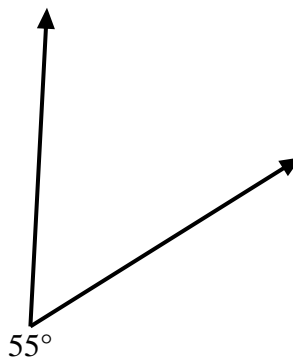
2)



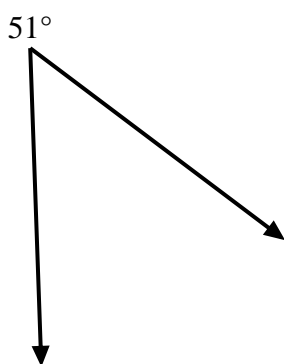
3)



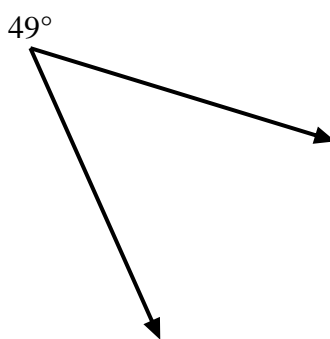
4)



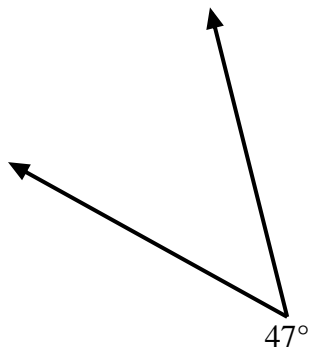
5)



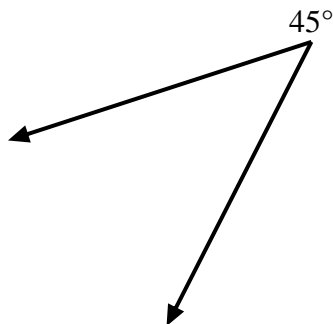
6)



7)



8)



Answers

1. **=132**

2. **=119**

3. **=103**

4. **=125**

5. **=129**

6. **=131**

7. **=133**

8. **=135**