



Determine which letter best represents the weight.

Ounce (oz)

An ounce is about the weight of a slice of bread.



Pound (lb)

A pound is about the weight of a can of vegetables.



Remember:

There are 16 ounces in 1 pound.

Answers

1. _____
2. _____
3. _____
4. _____
5. _____
6. _____
7. _____
8. _____
9. _____

1)



Candle

- A. 1 pound
- B. 0.2 ounces
- C. 16 ounces
- D. 20 pounds

2)



Bicycle

- A. 4 ounces
- B. 30 pounds
- C. 0.53 ounces
- D. 220 pounds


3)



DVD

- A. 16 ounces
- B. 0.6 pounds
- C. 2.5 pounds
- D. 1 pound

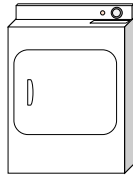
4)



Notebook Paper

- A. 2 pounds
- B. 0.1 ounces
- C. 3 ounces
- D. 10 ounces

5)



Clothes Dryer

- A. 160 ounces
- B. 7 pounds
- C. 110 pounds
- D. 1 ounce

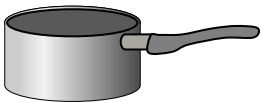
6)



Bug

- A. 2 pounds
- B. 110 pounds
- C. 0.04 ounces
- D. 2 ounces


7)



Cooking Pot

- A. 1.7 ounces
- B. 5 ounces
- C. 4 pounds
- D. 0.01 ounces

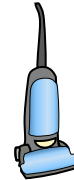
8)



Elephant

- A. 15 ounces
- B. 11000 pounds
- C. 4000 ounces
- D. 300 pounds

9)



Vacuum

- A. 3 ounces
- B. 2 ounces
- C. 1100 pounds
- D. 35 pounds




Determine which letter best represents the weight.

Ounce (oz)

Pound (lb)

An ounce is about the weight of a slice of bread.

A pound is about the weight of a can of vegetables.



Remember:

There are 16 ounces in 1 pound.

Answers

1)



Candle

- A. 1 pound
- B. 0.2 ounces
- C. 16 ounces
- D. 20 pounds

2)



Bicycle

- A. 4 ounces
- B. 30 pounds
- C. 0.53 ounces
- D. 220 pounds


3)



DVD

- A. 16 ounces
- B. 0.6 pounds
- C. 2.5 pounds
- D. 1 pound

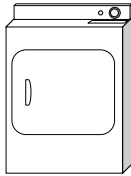
4)



Notebook Paper

- A. 2 pounds
- B. 0.1 ounces
- C. 3 ounces
- D. 10 ounces

5)



Clothes Dryer

- A. 160 ounces
- B. 7 pounds
- C. 110 pounds
- D. 1 ounce

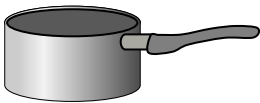
6)



Bug

- A. 2 pounds
- B. 110 pounds
- C. 0.04 ounces
- D. 2 ounces


7)



Cooking Pot

- A. 1.7 ounces
- B. 5 ounces
- C. 4 pounds
- D. 0.01 ounces

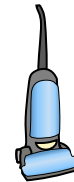
8)



Elephant

- A. 15 ounces
- B. 11000 pounds
- C. 4000 ounces
- D. 300 pounds

9)



Vacuum

- A. 3 ounces
- B. 2 ounces
- C. 1100 pounds
- D. 35 pounds

- 1. **B**
- 2. **B**
- 3. **B**
- 4. **B**
- 5. **C**
- 6. **C**
- 7. **C**
- 8. **B**
- 9. **D**