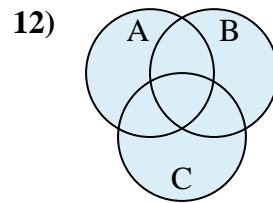
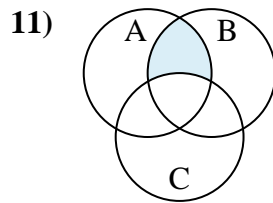
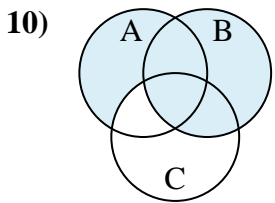
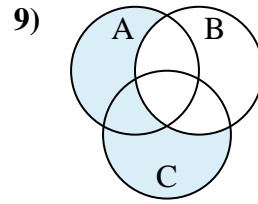
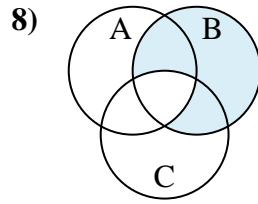
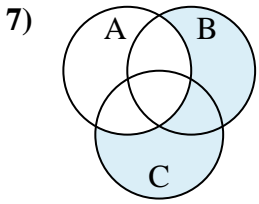
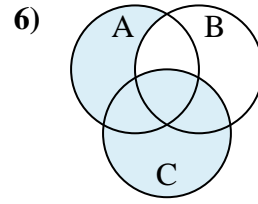
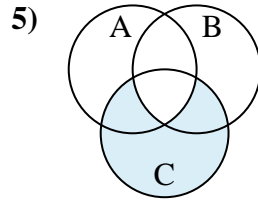
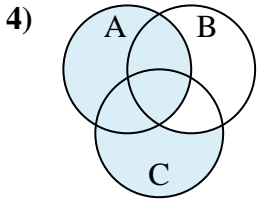
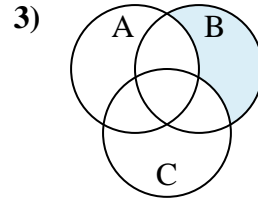
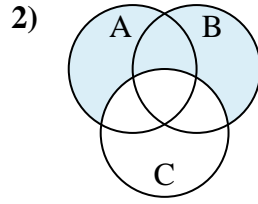
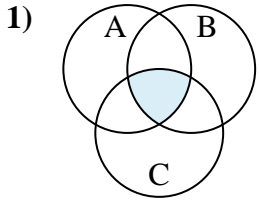




Determine the shaded region of each diagram.

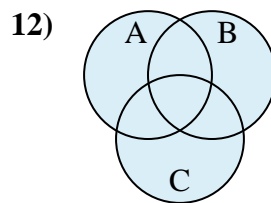
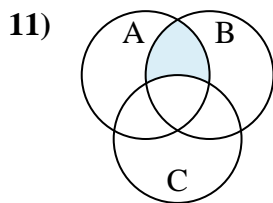
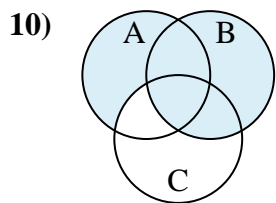
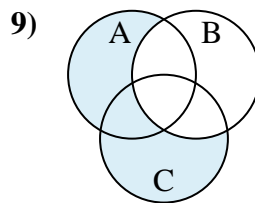
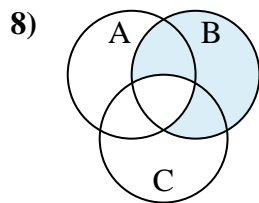
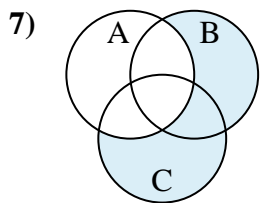
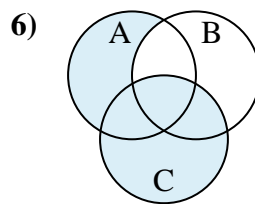
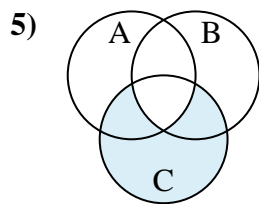
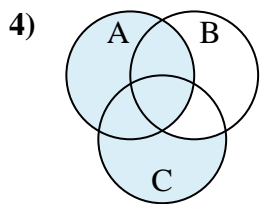
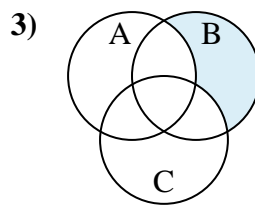
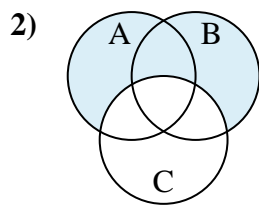
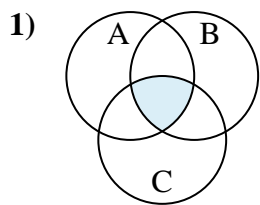
Answers



1. _____
2. _____
3. _____
4. _____
5. _____
6. _____
7. _____
8. _____
9. _____
10. _____
11. _____
12. _____



Determine the shaded region of each diagram.



Answers

1. $C \cap A \cap B$
2. $(B \cup A) - C$
3. $B - (C \cup A)$
4. $A \cup (C - B)$
5. $C - (A \cap B)$
6. $C \cup (A - B)$
7. $(B \cup C) - A$
8. $B - (A \cap C)$
9. $(C \cup A) - B$
10. $B \cup (A - C)$
11. $A \cap (B - C)$
12. $A \cup C \cup B$