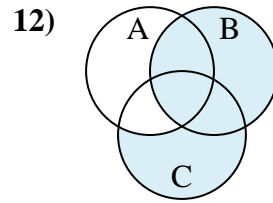
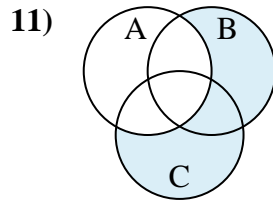
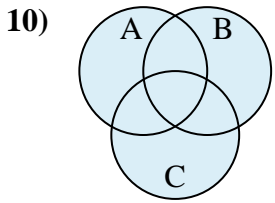
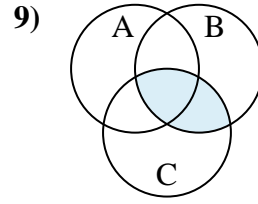
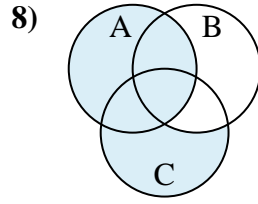
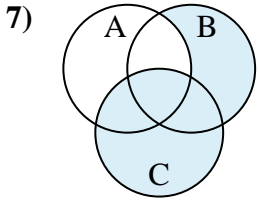
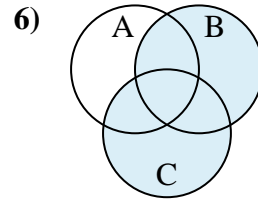
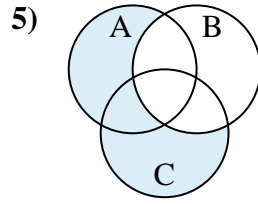
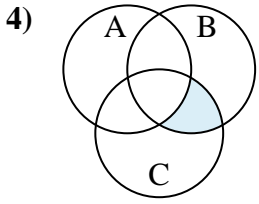
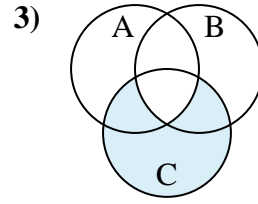
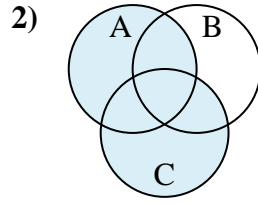
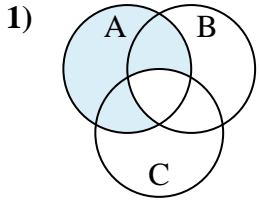




Determine the shaded region of each diagram.

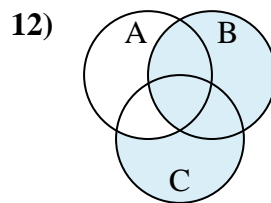
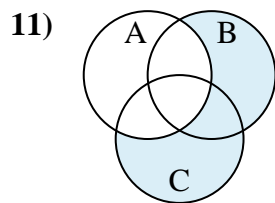
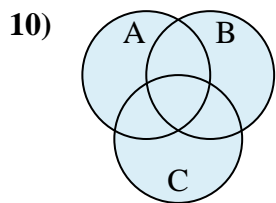
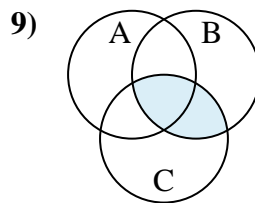
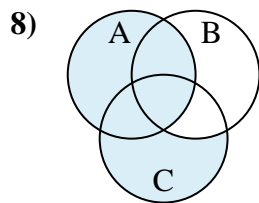
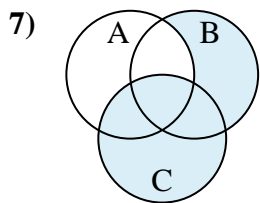
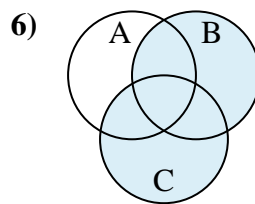
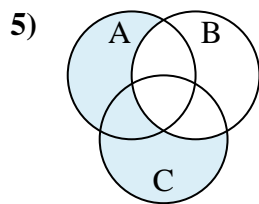
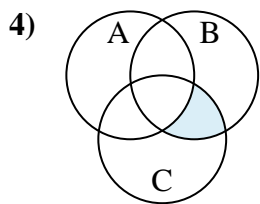
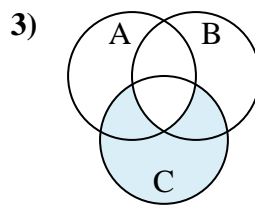
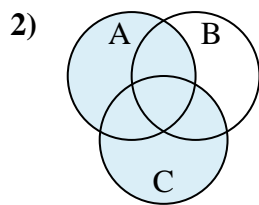
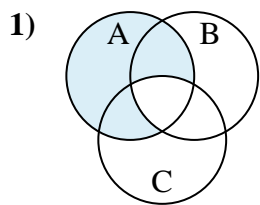
Answers



1. _____
2. _____
3. _____
4. _____
5. _____
6. _____
7. _____
8. _____
9. _____
10. _____
11. _____
12. _____



Determine the shaded region of each diagram.



Answers

1. $A - (B \cap C)$

2. $A \cup C$

3. $C - (B \cap A)$

4. $(C \cap B) - A$

5. $(A \cup C) - B$

6. $B \cup C$

7. $C \cup (B - A)$

8. $A \cup (C - B)$

9. $B \cap C$

10. $A \cup B \cup C$

11. $(B \cup C) - A$

12. $B \cup (C - A)$