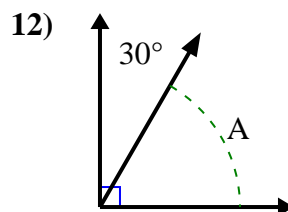
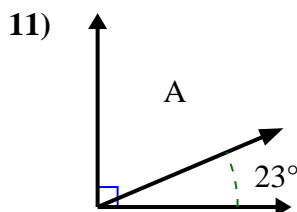
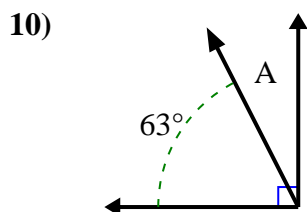
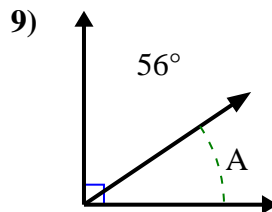
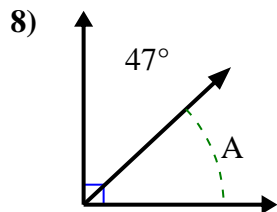
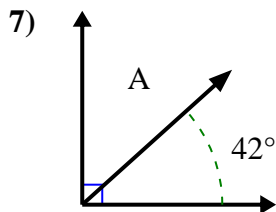
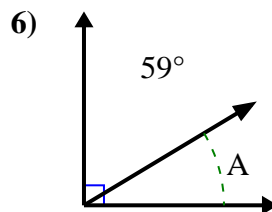
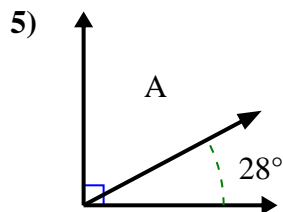
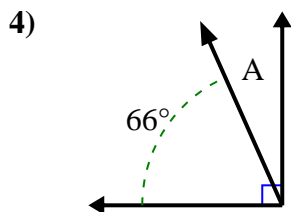
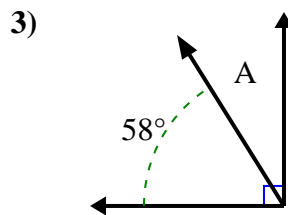
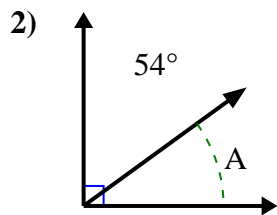
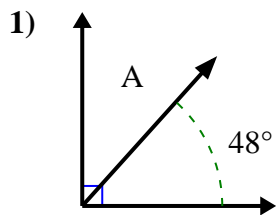




Find the value of 'A' in the set of complementary angles.

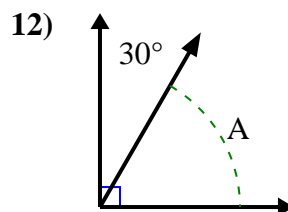
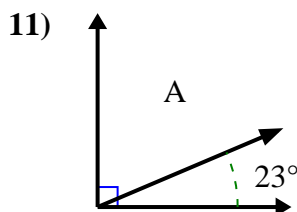
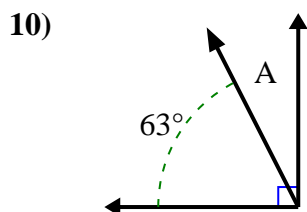
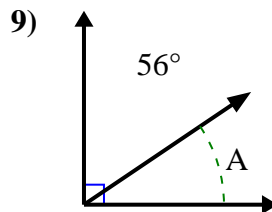
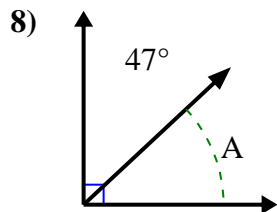
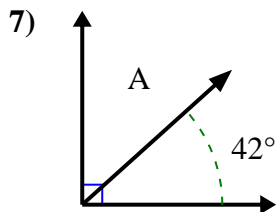
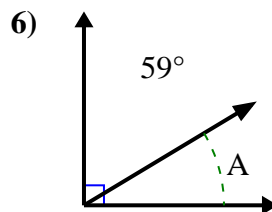
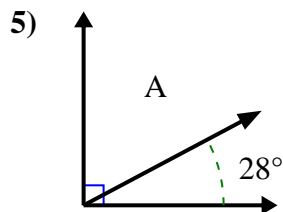
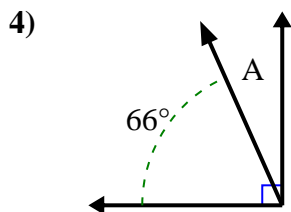
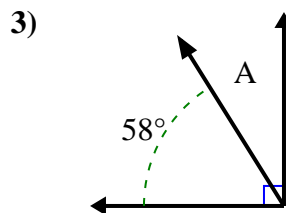
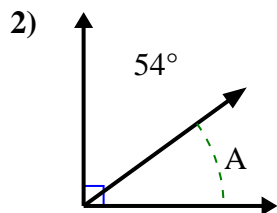
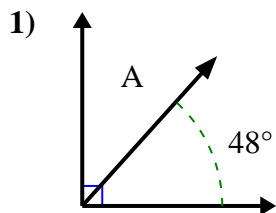


Answers

- 1. \_\_\_\_\_
- 2. \_\_\_\_\_
- 3. \_\_\_\_\_
- 4. \_\_\_\_\_
- 5. \_\_\_\_\_
- 6. \_\_\_\_\_
- 7. \_\_\_\_\_
- 8. \_\_\_\_\_
- 9. \_\_\_\_\_
- 10. \_\_\_\_\_
- 11. \_\_\_\_\_
- 12. \_\_\_\_\_



Find the value of 'A' in the set of complementary angles.



Answers

1. 42°

2. 36°

3. 32°

4. 24°

5. 62°

6. 31°

7. 48°

8. 43°

9. 34°

10. 27°

11. 67°

12. 60°