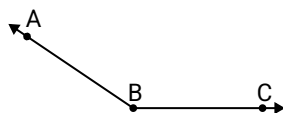




Solve each problem.

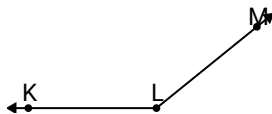
**Answers**

1)

Which choice best represents  $\angle ABC$ ?

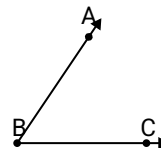
- A.  $25^\circ$
- B.  $146^\circ$
- C.  $123^\circ$
- D.  $176^\circ$

2)

Which choice best represents  $\angle KLM$ ?

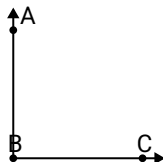
- A.  $69^\circ$
- B.  $90^\circ$
- C.  $141^\circ$
- D.  $39^\circ$

3)

Which choice best represents  $\angle ABC$ ?

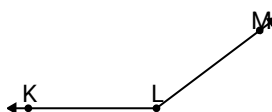
- A.  $148^\circ$
- B.  $56^\circ$
- C.  $91^\circ$
- D.  $174^\circ$

4)

Which choice best represents  $\angle ABC$ ?

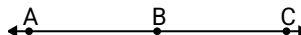
- A.  $48^\circ$
- B.  $25^\circ$
- C.  $172^\circ$
- D.  $90^\circ$

5)

Which choice best represents  $\angle KLM$ ?

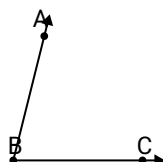
- A.  $13^\circ$
- B.  $77^\circ$
- C.  $143^\circ$
- D.  $109^\circ$

6)

Which choice best represents  $\angle ABC$ ?

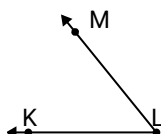
- A.  $94^\circ$
- B.  $68^\circ$
- C.  $118^\circ$
- D.  $180^\circ$

7)

Which choice best represents  $\angle ABC$ ?

- A.  $76^\circ$
- B.  $107^\circ$
- C.  $31^\circ$
- D.  $154^\circ$

8)

Which choice best represents  $\angle KLM$ ?

- A.  $114^\circ$
- B.  $139^\circ$
- C.  $51^\circ$
- D.  $169^\circ$

9)

Which choice best represents  $\angle ABC$ ?

- A.  $130^\circ$
- B.  $11^\circ$
- C.  $54^\circ$
- D.  $159^\circ$

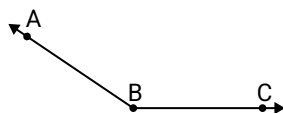
- 1. \_\_\_\_\_
- 2. \_\_\_\_\_
- 3. \_\_\_\_\_
- 4. \_\_\_\_\_
- 5. \_\_\_\_\_
- 6. \_\_\_\_\_
- 7. \_\_\_\_\_
- 8. \_\_\_\_\_
- 9. \_\_\_\_\_



Solve each problem.

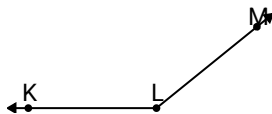
**Answers**

1)

Which choice best represents  $\angle ABC$ ?

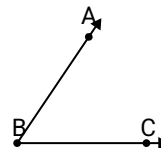
- A.  $25^\circ$
- B.  $146^\circ$
- C.  $123^\circ$
- D.  $176^\circ$

2)

Which choice best represents  $\angle KLM$ ?

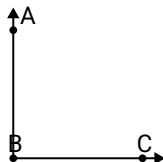
- A.  $69^\circ$
- B.  $90^\circ$
- C.  $141^\circ$
- D.  $39^\circ$

3)

Which choice best represents  $\angle ABC$ ?

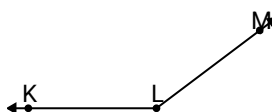
- A.  $148^\circ$
- B.  $56^\circ$
- C.  $91^\circ$
- D.  $174^\circ$

4)

Which choice best represents  $\angle ABC$ ?

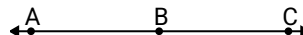
- A.  $48^\circ$
- B.  $25^\circ$
- C.  $172^\circ$
- D.  $90^\circ$

5)

Which choice best represents  $\angle KLM$ ?

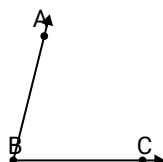
- A.  $13^\circ$
- B.  $77^\circ$
- C.  $143^\circ$
- D.  $109^\circ$

6)

Which choice best represents  $\angle ABC$ ?

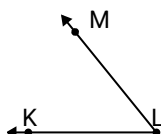
- A.  $94^\circ$
- B.  $68^\circ$
- C.  $118^\circ$
- D.  $180^\circ$

7)

Which choice best represents  $\angle ABC$ ?

- A.  $76^\circ$
- B.  $107^\circ$
- C.  $31^\circ$
- D.  $154^\circ$

8)

Which choice best represents  $\angle KLM$ ?

- A.  $114^\circ$
- B.  $139^\circ$
- C.  $51^\circ$
- D.  $169^\circ$

9)

Which choice best represents  $\angle ABC$ ?

- A.  $130^\circ$
- B.  $11^\circ$
- C.  $54^\circ$
- D.  $159^\circ$

- 1. **B**
- 2. **C**
- 3. **B**
- 4. **D**
- 5. **C**
- 6. **D**
- 7. **A**
- 8. **C**
- 9. **B**