




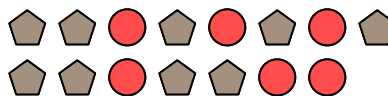
Solve each problem.

**Answers**

Ex) What is the ratio of stars to hearts?



1) What is the ratio of circles to pentagons?

Ex. **3:15**

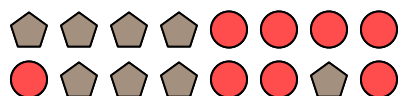
2) What is the ratio of triangles to hearts?



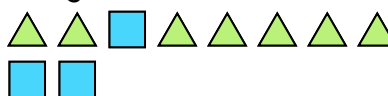
3) What is the ratio of moons to circles?



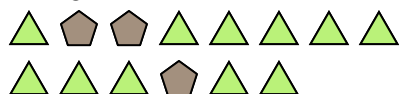
4) What is the ratio of pentagons to circles?



5) What is the ratio of squares to triangles?




6) What is the ratio of pentagons to triangles?



7) What is the ratio of triangles to stars?




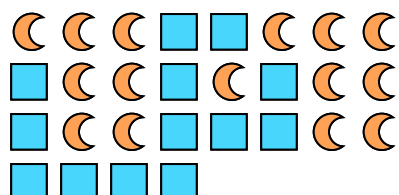
8) What is the ratio of circles to squares?



9) What is the ratio of moons to squares?



10) What is the ratio of moons to squares? 11) What is the ratio of moons to squares?



1. \_\_\_\_\_

2. \_\_\_\_\_

3. \_\_\_\_\_

4. \_\_\_\_\_

5. \_\_\_\_\_

6. \_\_\_\_\_

7. \_\_\_\_\_

8. \_\_\_\_\_

9. \_\_\_\_\_


10. \_\_\_\_\_

11. \_\_\_\_\_

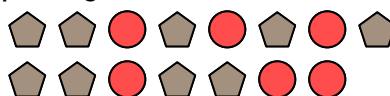


Solve each problem.

Ex) What is the ratio of stars to hearts?




1) What is the ratio of circles to pentagons?



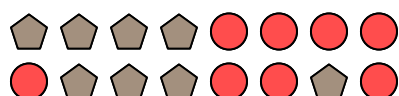
2) What is the ratio of triangles to hearts?



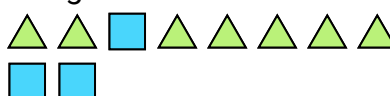
3) What is the ratio of moons to circles?



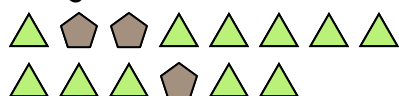
4) What is the ratio of pentagons to circles?



5) What is the ratio of squares to triangles?




6) What is the ratio of pentagons to triangles?



7) What is the ratio of triangles to stars?




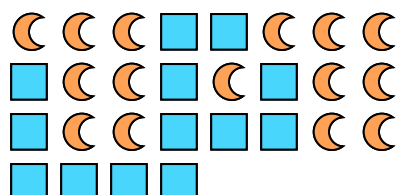
8) What is the ratio of circles to squares?



9) What is the ratio of moons to squares?



10) What is the ratio of moons to squares? 11) What is the ratio of moons to squares?

**Answers**Ex. **3:15**1. **6:9**2. **3:10**3. **13:3**4. **8:8**5. **3:7**6. **3:11**7. **5:3**8. **12:2**9. **14:2**10. **15:13**11. **15:3**