




Solve each problem.

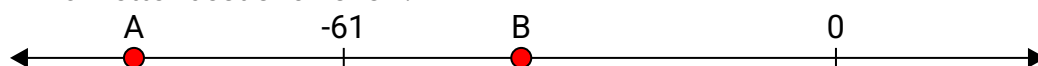
**Answers**

- 1) Which letter best shows -84?




1. \_\_\_\_\_

- 2) Which letter best shows -87?




2. \_\_\_\_\_

- 3) Which letter best shows -12?




3. \_\_\_\_\_

- 4) Which letter best shows -43?



4. \_\_\_\_\_

- 5) Which letter best shows -112?




5. \_\_\_\_\_

- 6) Which letter best shows -31?




6. \_\_\_\_\_

- 7) Which letter best shows -21?



7. \_\_\_\_\_

- 8) Which letter best shows -21?




8. \_\_\_\_\_

- 9) Which letter best shows -55?



9. \_\_\_\_\_

- 10) Which letter best shows -103?




10. \_\_\_\_\_



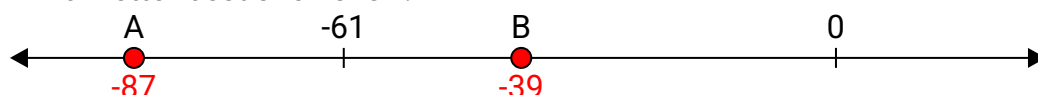
Solve each problem.

**Answers**

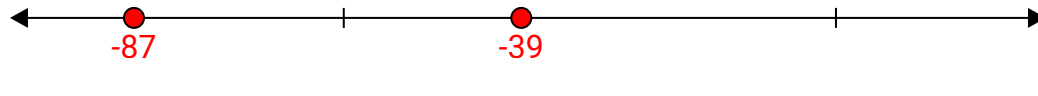
- 1) Which letter best shows -84?

1. **A**


- 2) Which letter best shows -87?

2. **A**


- 3) Which letter best shows -12?

3. **B**


- 4) Which letter best shows -43?

4. **B**


- 5) Which letter best shows -112?

5. **A**


- 6) Which letter best shows -112?

6. **B**


- 7) Which letter best shows -31?

7. **B**


- 8) Which letter best shows -21?

8. **B**

- 9) Which letter best shows -21?

9. **B**

- 10) Which letter best shows -55?

10. **A**

- 10) Which letter best shows -103?

