





Solve each problem.

Answers

- 1) At the fair Faye spent \$11.27 buying fair food. She gave the cashier a twenty dollar bill. How much change should she get back?



- 2) Edward spent \$9.11 buying some new toys. He bought them using a ten dollar bill. How much change should he get back?



- 3) At the book fair Sam spent \$9.43 buying books. He gave the cashier a twenty dollar bill. How much change should he get back?



1. _____
2. _____
3. _____



Solve each problem.



Answers

- 1) At the fair Faye spent \$11.27 buying fair food. She gave the cashier a twenty dollar bill. How much change should she get back?



1. **D**
2. **B**
3. **C**

- 2) Edward spent \$9.11 buying some new toys. He bought them using a ten dollar bill. How much change should he get back?



- 3) At the book fair Sam spent \$9.43 buying books. He gave the cashier a twenty dollar bill. How much change should he get back?

