



Counting Change (within a dollar)

Name: _____

Determine the amount of money shown.


Answers



1. _____



2. _____



3. _____



4. _____




5. _____



6. _____



7. _____



8. _____



9. _____



10. _____



Counting Change (within a dollar)

Name: **Answer Key**

Determine the amount of money shown.


Answers



1. **\$0.99**



2. **\$0.96**



3. **\$0.82**



4. **\$0.94**




5. **\$0.96**



6. **\$0.91**



7. **\$0.47**



8. **\$0.94**



9. **\$0.98**



10. **\$0.99**