



Identifying Fractions

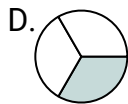
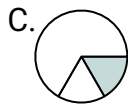
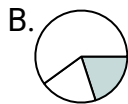
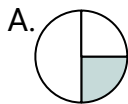
Name: _____

Determine which letter best represents each fraction.

Answers

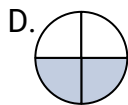
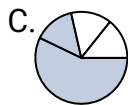
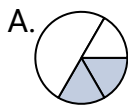
1)

Which choice best represents $\frac{1}{3}$?



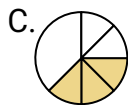
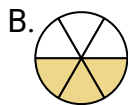
2)

Which choice best represents $\frac{2}{4}$?



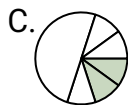
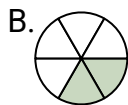
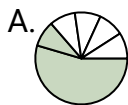
3)

Which choice best represents $\frac{3}{6}$?



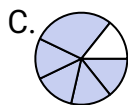
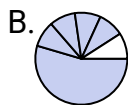
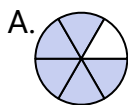
4)

Which choice best represents $\frac{2}{6}$?



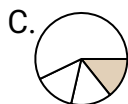
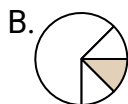
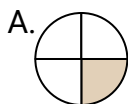
5)

Which choice best represents $\frac{5}{6}$?



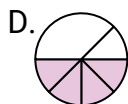
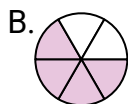
6)

Which choice best represents $\frac{1}{4}$?



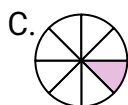
7)

Which choice best represents $\frac{4}{6}$?



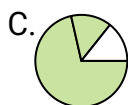
8)

Which choice best represents $\frac{1}{8}$?



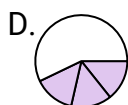
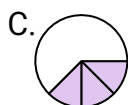
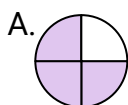
9)

Which choice best represents $\frac{2}{3}$?



10)

Which choice best represents $\frac{3}{4}$?



11)

Which choice best represents $\frac{3}{8}$?



12)

Which choice best represents $\frac{4}{8}$?



1. _____

2. _____

3. _____

4. _____

5. _____

6. _____

7. _____

8. _____

9. _____

10. _____

11. _____

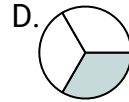
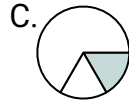
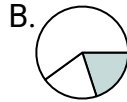
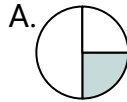
12. _____



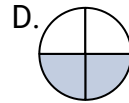
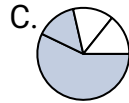
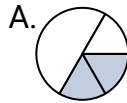
Determine which letter best represents each fraction.

Answers

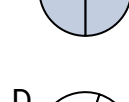
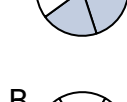
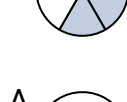
1)

Which choice best represents $\frac{1}{3}$?1. **D**

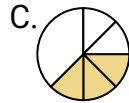
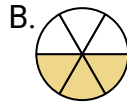
2)

Which choice best represents $\frac{2}{4}$?2. **D**


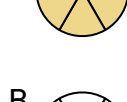
3)

Which choice best represents $\frac{2}{4}$?3. **B**

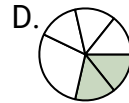
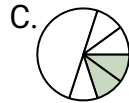
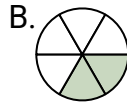
3)

Which choice best represents $\frac{3}{6}$?4. **B**

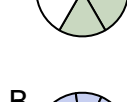
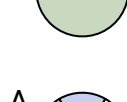
4)

Which choice best represents $\frac{3}{6}$?5. **A**

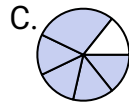
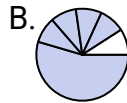
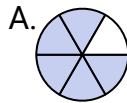
4)

Which choice best represents $\frac{2}{6}$?6. **A**

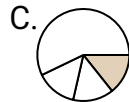
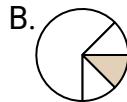
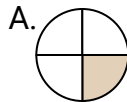
5)

Which choice best represents $\frac{2}{6}$?7. **B**

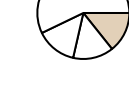
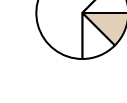
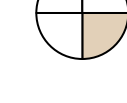
5)

Which choice best represents $\frac{5}{6}$?8. **C**

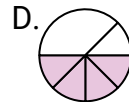
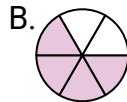
6)

Which choice best represents $\frac{1}{4}$?9. **B**

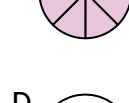

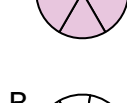
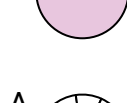
6)

Which choice best represents $\frac{1}{4}$?10. **A**

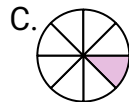
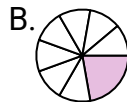
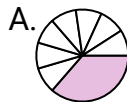
7)

Which choice best represents $\frac{4}{6}$?11. **B**

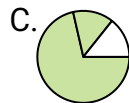
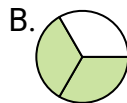
7)

Which choice best represents $\frac{4}{6}$?12. **B**

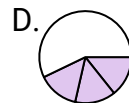
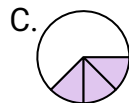
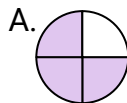
8)

Which choice best represents $\frac{1}{8}$?

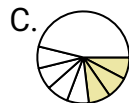
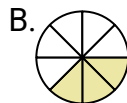
9)

Which choice best represents $\frac{2}{3}$?

10)

Which choice best represents $\frac{3}{4}$?

11)

Which choice best represents $\frac{3}{8}$?

12)

Which choice best represents $\frac{4}{8}$?