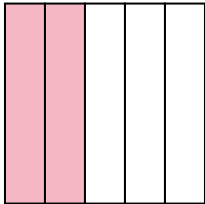


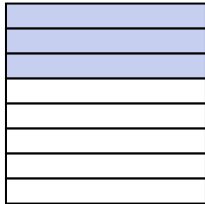


Write the shaded amount in word form.


Ex)



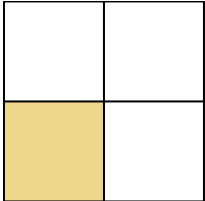
1)



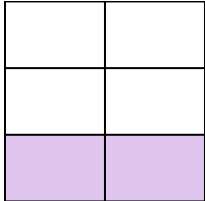
2)



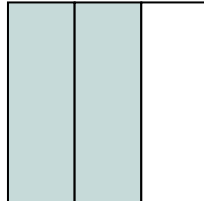
3)



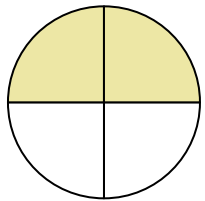
4)



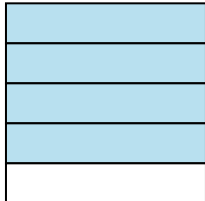
5)



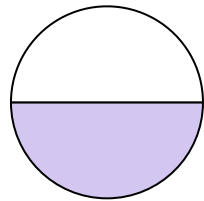
6)



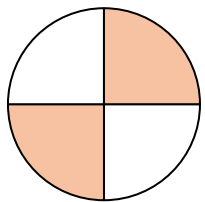
7)



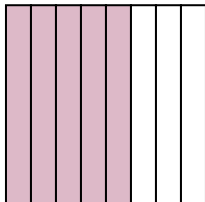
8)



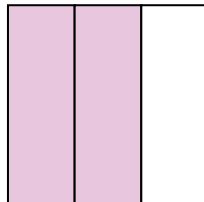
9)



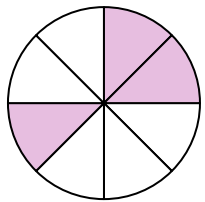
10)



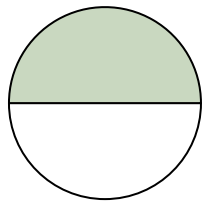
11)



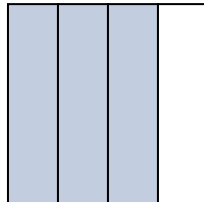
12)



13)



14)

**Answers**Ex. **two-fifths**

1. _____

2. _____

3. _____

4. _____

5. _____

6. _____

7. _____

8. _____

9. _____

10. _____

11. _____

12. _____

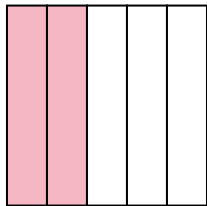
13. _____

14. _____

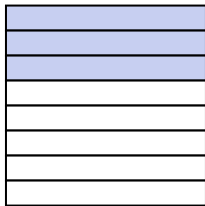


Write the shaded amount in word form.


Ex)




1)



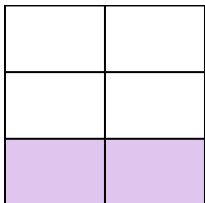
2)



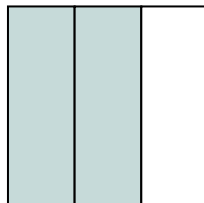
3)



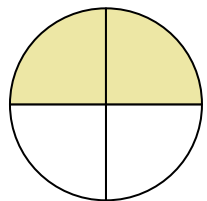
4)



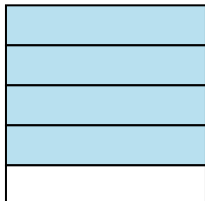
5)



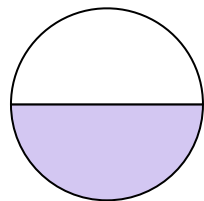
6)



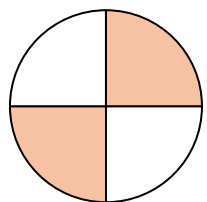
7)



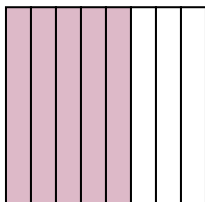
8)



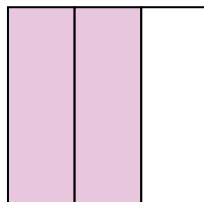
9)



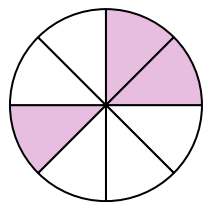
10)



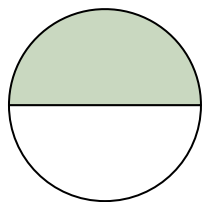
11)



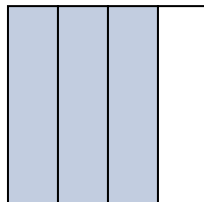
12)



13)



14)

**Answers**

Ex.

two-fifths

1.

three-eighths

2.

one-half

3.

one-third

4.

two-fifths

5.

two-thirds

6.

two-fourths

7.

four-fifths

8.

one-half

9.

two-fourths

10.

five-eighths

11.

two-thirds

12.

three-eighths

13.

one-half

14.

three-fourths