





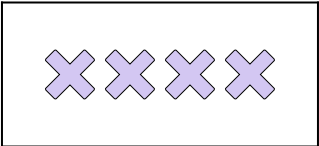
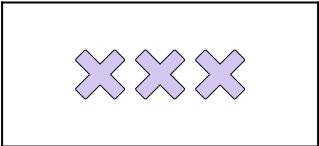
## Matching Addition

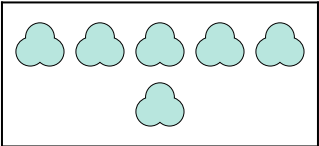

Name: \_\_\_\_\_

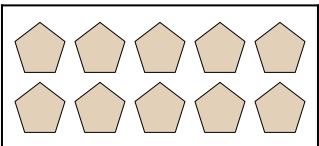
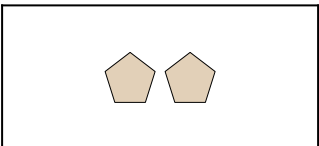
Express the visual problem as an equation with answer.

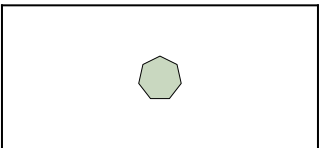
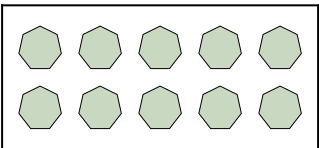
### Answers

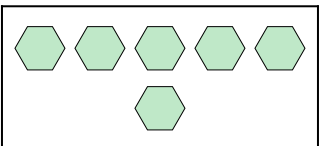
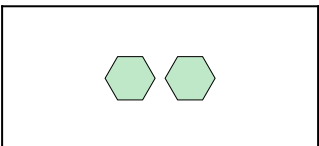
1)  +  =

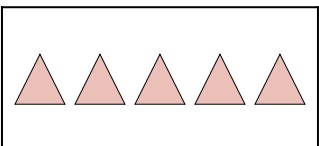
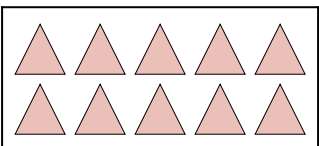
2)  +  =

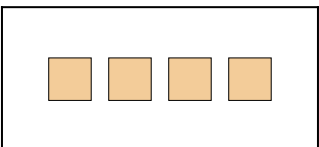
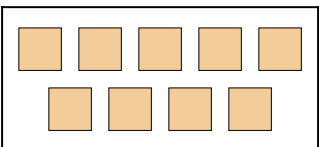
3)  +  =



4)  +  =



5)  +  =

6)  +  =

7)  +  =

8)  +  =

9)  +  =

10)  +  =

1. \_\_\_\_\_

2. \_\_\_\_\_

3. \_\_\_\_\_

4. \_\_\_\_\_

5. \_\_\_\_\_

6. \_\_\_\_\_

7. \_\_\_\_\_

8. \_\_\_\_\_

9. \_\_\_\_\_



10. \_\_\_\_\_

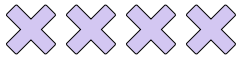





# Matching Addition

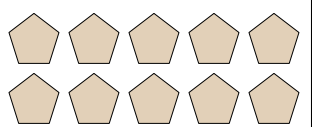
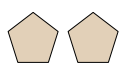
Name: **Answer Key**


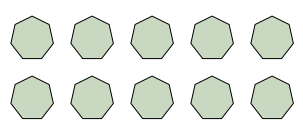
Express the visual problem as an equation with answer.

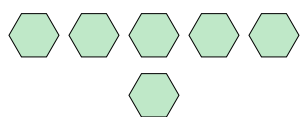
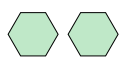
1)  +  =


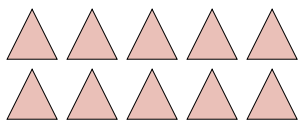
2)  +  =


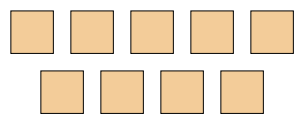
3)  +  =



4)  +  =



5)  +  =

6)  +  =

7)  +  =

8)  +  =

9)  +  =

10)  +  =

## Answers

1.  $2 + 8 = 10$

2.  $4 + 3 = 7$

3.  $6 + 8 = 14$

4.  $10 + 2 = 12$

5.  $1 + 10 = 11$

6.  $6 + 2 = 8$

7.  $5 + 10 = 15$

8.  $4 + 9 = 13$

9.  $10 + 2 = 12$

10.  $2 + 4 = 6$