

**Solve each problem.****Answers**

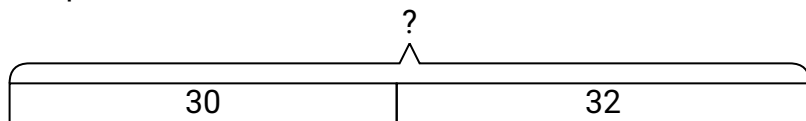
- 1) For a party Will spent 30 dollars on food and 32 dollars on drinks. How much did Will spend total?
- 2) At the fair Maria started with 21 tickets and then bought 38 more. How many tickets did Maria have total?
- 3) While exercising Paul did 11 push-ups in the morning and 15 more in the afternoon. How many push-ups did Paul do total?
- 4) A farmer planted 24 seeds on Wednesday and another 38 seeds on Thursday. How many seeds did he plant total?
- 5) In the first half of a trivia game George scored 29 points. In the second half he scored 50 points. How many points did he score total?
- 6) Sarah had 37 pieces of candy. Her friend gave her 32 more pieces. How many pieces of candy did Sarah have total?
- 7) Kaleb had 21 dollars saved up. After doing some chores his mother gave him another 48 dollars. How much money does he have total?

1. \_\_\_\_\_
2. \_\_\_\_\_
3. \_\_\_\_\_
4. \_\_\_\_\_
5. \_\_\_\_\_
6. \_\_\_\_\_
7. \_\_\_\_\_

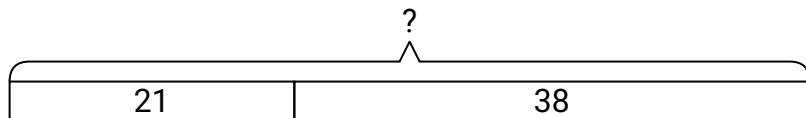


Solve each problem.

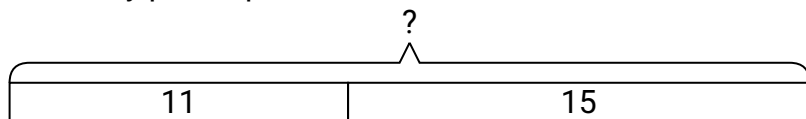
- 1) For a party Will spent 30 dollars on food and 32 dollars on drinks. How much did Will spend total?



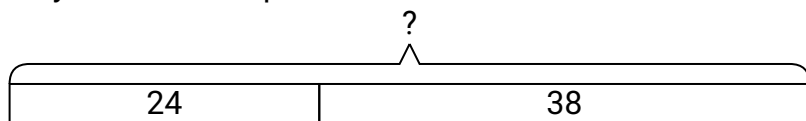
- 2) At the fair Maria started with 21 tickets and then bought 38 more. How many tickets did Maria have total?



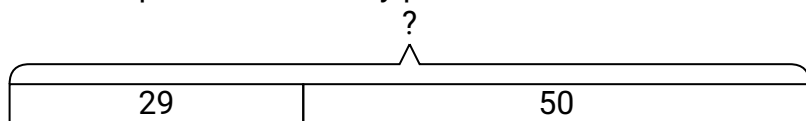
- 3) While exercising Paul did 11 push-ups in the morning and 15 more in the afternoon. How many push-ups did Paul do total?



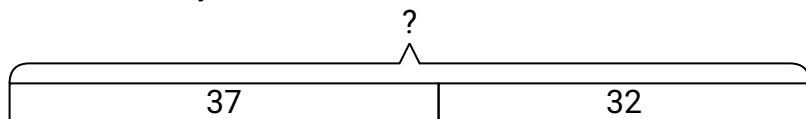
- 4) A farmer planted 24 seeds on Wednesday and another 38 seeds on Thursday. How many seeds did he plant total?



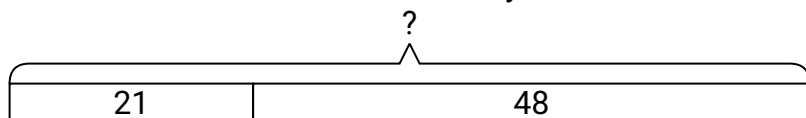
- 5) In the first half of a trivia game George scored 29 points. In the second half he scored 50 points. How many points did he score total?



- 6) Sarah had 37 pieces of candy. Her friend gave her 32 more pieces. How many pieces of candy did Sarah have total?



- 7) Kaleb had 21 dollars saved up. After doing some chores his mother gave him another 48 dollars. How much money does he have total?

**Answers**1. **62**2. **59**3. **26**4. **62**5. **79**6. **69**7. **69**